

2025-2026.

THE TRANSFER TEST

www.thetransfertest.com | sales@thetransfertest.com

Teacher's Copy.

P7

School Edition

Practice Test Paper 10

Time: 60 minutes

VERSION 2 (with Practice Test section)

for SEAG Entrance Assessment

English - Practice Test

In this question there is either **one** punctuation mistake or **no** punctuation mistake.
Find the group of words with the mistake in it and mark its letter on your answer sheet.
If there is no mistake, mark N.

P1 His mum packed warm clothes spare trainers and his favourite teddy.
A B C D

In this question you have to choose the **best** word to complete the sentence, so that it makes sense and is written in correct English. Choose **the** best answer and mark its letter on your answer sheet.

P2 My friend came to my house
A B C D E
today to play board games.

In this question there is either **one** spelling mistake or **no** spelling mistake. Find the group of words with the mistake in it and mark its letter on your answer sheet. **If there is no mistake, mark N.**

P3 They walked towards the door and slowly turned the handle as
A B C
silently as possible.
D

Read this passage to yourself.

Then she went to an old chest in the room, and opening it, took out what looked like a piece of dried seaweed. This she threw into a tub of water. Then she threw some powder into the water, and stirred it with her bare arm, muttering over it words of hideous sound, and yet more hideous import. Then she set the tub aside, and took from the chest a huge bunch of a hundred rusty keys that clattered in her shaking hands. Then she sat down and proceeded to oil them all. Before she had finished, out from the tub, the water of which had kept on a slow motion ever since she had ceased stirring it, came the head and half the body of a huge grey snake.

Answer this question. Choose **one** answer from the options below and mark its letter on your answer sheet.

P4 What was the second thing that was put into the water?

- A a grey snake
- B dried seaweed
- C powder
- D a bunch of keys
- E oil

For this question, you have to **write your answer** in the box provided on your answer sheet (box P5).

P5 Which part of speech is 'threw' as it appears in the passage? (line 2)



Maths - Practice Test

P6

There are 32 pupils in a class.
 $\frac{1}{4}$ of the pupils have a packed lunch.
The rest of the pupils go to the canteen.

How many pupils go to the canteen?

- A 8 B 20 C 28 D 24 E 16

P7

A bag contains different coloured counters.
There are five different colours in the bag:

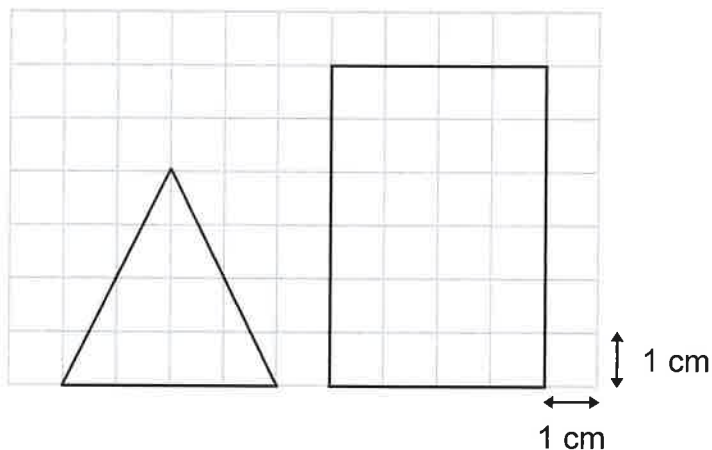
Red Green Blue Yellow Orange

There are an equal number of each colour in the bag.

What is the probability that a red counter will be picked at random?

- A 5% B 10% C 15% D 20% E 25%

P8



What is the difference in the area between these two shapes?

- A 4 cm² B 12 cm² C 16 cm² D 8 cm² E 20 cm²

For these questions you have to **write your answers** in the boxes provided on your answer sheet (box P9 and P10). The units of measurement have been given.

P9

$$73.64 + 60.50 = ?$$

P10

This is the calendar for April 2024.

APRIL 2024						
MON	TUE	WED	THU	FRI	SAT	SUN
1	2	3	4	5	6	7
8	9	10	11	12	13	14
15	16	17	18	19	20	21
22	23	24	25	26	27	28
29	30					

On what day of the week was 8th May 2024?



English - Main Test

In this exercise there are some mistakes with **punctuation** or use of **capital letters**. On each numbered line there is either **one** mistake or **no** mistake. Find the group of words with the mistake in it and **mark its letter on your answer sheet**. If there is no mistake, mark **N**.

Punctuation Exercise

- 1 Did you go to the shops on the way home from school today. [?]
A B C D
- 2 Jack didn't want to play sports outside in the Winter as it was too cold.
A B C D
- 3 'We must keep quiet at all times!' she whispered. Jess knew that the librarian
was always in a bad mood.
A B C D
- 4 'Don't forget to switch the light's off before you leave the house,' she shouted.
A B C D
- 5 Ross wasn't sure why his friends weren't at the meeting point they'd arranged.
A B C D N

In this exercise you have to choose the **best** word, or **group of words**, to complete each numbered line so that the passage makes sense and is written in correct English. Choose the best answer and **mark its letter on your answer sheet**.

Grammar Exercise

6

He decided to stay in bed as he felt too

lively lethargic energetic allergic alert to go out.
A B C D E

7

Stay indoors until before despite throughout while
A B C D E

the storm has passed.

8

They were old enough now that their mum let them stay at home by

himself herself yourselves themselves itself
A B C D E

9

At 3 pm the rain begin halt stop beginning ceased
A B C D E

and the sun came out.

10

My sister went to the supermarket and

buy bought buyed will buy is buying all the bottles of
A B C D E

juice she could carry.

In this exercise there are some **spelling** mistakes. On each numbered line there is either **one** mistake or **no** mistake. Find the group of words with the mistake in it and **mark its letter on your answer sheet**. If there is no mistake, mark **N**.

Spelling Exercise

- 11 She carefully searched for the correct spelling of each word in the ^{dictionary} dictionary.
A B C D
- 12 Gran ^{bought} boghut me a subscription to my favourite magazine for my birthday.
A B C D
- 13 He was conscious that he may ^{disappoint} disapoint his parents if he continued to stay out late.
A B C D
- 14 The hotel suite was hugely comfortable and ^{exceeded} exseeded the guest's expectations.
A B C D
- 15 The correspondent reported the news from a foreign location, which was not familiar.
A B C D N

Read the **whole** passage carefully, then answer the questions that follow.

My Father's Dragon

1. "Well," said the cat, "If you'd really like to fly that much, I think I know of a sort of a way you
2. might get to fly while you're still a little boy."
3. "You mean you know where I could get an airplane?"
4. "Well, not exactly an airplane, but something even better. As you can see, I'm an old cat
5. now, but in my younger days I was quite a traveler. My traveling days are over but last
6. spring I took just one more trip and sailed to the Island of Tangerina, stopping at the port of
7. Cranberry. Well, it just so happened that I missed the boat, and while waiting for the next I
8. thought I'd look around a bit. I was particularly interested in a place called Wild Island,
9. which we had passed on our way to Tangerina. Wild Island and Tangerina are joined
10. together by a long string of rocks, but people never go to Wild Island because it's mostly
11. jungle and inhabited by very wild animals. So, I decided to go across the rocks and explore
12. it for myself. It certainly is an interesting place, but I saw something there that made me
13. want to weep."
14. "Wild Island is practically cut in two by a very wide and muddy river," continued the cat.
15. "This river begins near one end of the island and flows into the ocean at the other. Now the
16. animals there are very lazy, and they used to hate having to go all the way around the
17. beginning of this river to get to the other side of the island. It made visiting inconvenient and
18. mail deliveries slow, particularly during the Christmas rush. Crocodiles could have carried
19. passengers and mail across the river, but crocodiles are very moody, and not the least bit
20. dependable, and are always looking for something to eat. They don't care if the animals
21. have to walk around the river, so that's just what the animals did for many years."
22. "But what does all this have to do with airplanes?" asked my father, who thought the cat
23. was taking an awfully long time to explain.
24. "Be patient, Elmer," said the cat, and she went on with the story. "One day about four
25. months before I arrived on Wild Island a baby dragon fell from a low-flying cloud onto the
26. bank of the river. He was too young to fly very well, and besides, he had bruised one wing
27. quite badly, so he couldn't get back to his cloud. The animals found him soon afterwards
28. and everybody said, 'Why, this is just exactly what we've needed all these years!' They tied
29. a big rope around his neck and waited for the wing to get well. This was going to end all
30. their crossing-the-river troubles."

31. "I've never seen a dragon," said my father. "Did you see him? How big is he?"
32. "Oh, yes, indeed I saw the dragon. In fact, we became great friends," said the cat. "I used to
33. hide in the bushes and talk to him when nobody was around. He's not a very big dragon,
34. about the size of a large black bear, although I imagine he's grown quite a bit since I left.
35. He's got a long tail and yellow and blue stripes. His horn and eyes and the bottoms of his
36. feet are bright red, and he has gold-colored wings."
37. "Oh, how wonderful!" said my father. "What did the animals do with him when his wing got
38. well?"
39. "They started training him to carry passengers, and even though he is just a baby dragon,
40. they work him all day and all night too sometimes. They make him carry loads that are much
41. too heavy, and if he complains, they twist his wings and beat him. He's always tied to a
42. stake on a rope just long enough to go across the river. His only friends are the crocodiles,
43. who say 'Hello' to him once a week if they don't forget. Really, he's the most miserable
44. animal I've ever come across. When I left I promised I'd try to help him someday, although I
45. couldn't see how. The rope around his neck is about the biggest, toughest rope you can
46. imagine, with so many knots it would take days to untie them all.
47. "Anyway, when you were talking about airplanes, you gave me a good idea. Now, I'm quite
48. sure that if you were able to rescue the dragon, which wouldn't be the least bit easy, he'd let
49. you ride him most anywhere, provided you were nice to him, of course. How about trying it?"
50. "Oh, I'd love to," said my father, and he was so angry at his mother for being rude to the cat
51. that he didn't feel the least bit sad about running away from home for a while.
52. That very afternoon my father and the cat went down to the docks to see about ships going
53. to the Island of Tangerina. They found out that a ship would be sailing the next week, so
54. right away they started planning for the rescue of the dragon. The cat was a great help in
55. suggesting things for my father to take with him, and she told him everything she knew
56. about Wild Island. Of course, she was too old to go along.
57. Everything had to be kept very secret, so when they found or bought anything to take on the
58. trip they hid it behind a rock in the park. The night before my father sailed he borrowed his
59. father's knapsack and he and the cat packed everything very carefully. He took chewing
60. gum, two dozen pink lollipops, a package of rubber bands, black rubber boots, a compass,
61. a tooth brush and a tube of tooth paste, six magnifying glasses, a very sharp jackknife, a
62. comb and a hairbrush, seven hair ribbons of different colors, an empty grain bag with a label
63. saying "Cranberry," some clean clothes, and enough food to last my father while he was on
64. the ship.

65. He couldn't live on mice, so he took twenty-five peanut butter and jelly sandwiches and
66. six apples, because that's all the apples he could find in the pantry.
67. When everything was packed my father and the cat went down to the docks to the ship.
68. A night watchman was on duty, so while the cat made loud queer noises to distract his
69. attention, my father ran over the gang-plank onto the ship. He went down into the hold
70. and hid among some bags of wheat. The ship sailed early the next morning.

Please answer these questions. (Look at the passage again if you need to.)
You should choose the **best** answer and mark its letter on your answer sheet.

16

Look at lines 1-13.

What activity did the cat enjoy doing when he was young?

- A travelling
- B talking to little boys
- C flying in airplanes
- D talking to crocodiles
- E flying on dragons

17

What word would best describe the cat's personality?

- A solemn
- B adventurous
- C cowardly
- D lazy
- E nervous

18

Look at lines 4-13.

Why did people not visit Wild Island?

- A It is hard to get to.
- B It is joined to Tangerina.
- C It's mostly rocks.
- D It's not very interesting.
- E Many wild animals live there.

19

Why was it tricky for the animals to get to the other side of the island?

- A Crocodiles live on the other side.
- B They are lazy.
- C There is a wide river in the middle.
- D There are too many rocks.
- E It is easy to miss the boat.

20

Why could the dragon not fly away from the island after he landed?

- A He was only four months old.
- B He wasn't good at flying.
- C He had injured his wing.
- D He liked Wild Island.
- E The animals put a rope around his neck before he had the chance.

21

Look at lines 39-46.

Why was the baby dragon sad?

- A He was being held captive.
- B The crocodiles were mean to him.
- C He wasn't allowed to fly.
- D The cat refused to help him.
- E The rope hurt his neck.

22

**How did his father manage to get on the ship without being seen?
Choose TWO.**

- 1 there was nobody on duty
- 2 he was very quick
- 3 the cat created a diversion
- 4 the cat ran over the gang-plank
- 5 he hid in a bag of wheat

- A 2 and 5
- B 4 and 5
- C 1 and 2
- D 2 and 3
- E 1 and 3

For these questions you have to **write your answers**, neatly, in the boxes provided on your answer sheet.

23 What colour are the bottom of the dragon's feet?

bright red.

24 How many pink lollipops did the boy take on his journey?

24 or 2 dozen.

25 Which one word in lines 22-26 means the same as 'to accept or tolerate delay'?

patient

26 Which one word in lines 39-43 means the same as 'protests'?

complains.

27 'Crocodiles could have carried passengers' (lines 18-20).
Write all the adjectives in this sentence.

moody , least , dependable .

28 "What did the animals do with him when his wing got well?"
(lines 37-38)

What are the two pronouns in this sentence?

him and his.

Maths - Main Test

29

$$854 - y = 585$$

$$\begin{array}{r} 7834 \\ - 585 \\ \hline 269 \end{array}$$

What number is represented by the letter y?

A 271

B 331

C 269

D 1439

E 279

30

In three years time, Louie's dog will be ten years old.

$$10 - 3 = 7$$

How old was his dog five years ago? $7 - 5 = 2$

A 2

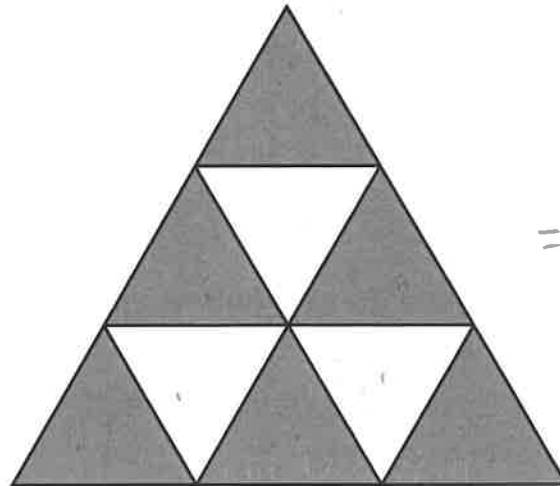
B 7

C 15

D 3

E 5

31



$$= \frac{6}{9} = \frac{2}{3}$$

What fraction of the whole shape is shaded?

A $\frac{2}{6}$

B $\frac{6}{8}$

C $\frac{2}{3}$

D $\frac{3}{4}$

E $\frac{5}{9}$

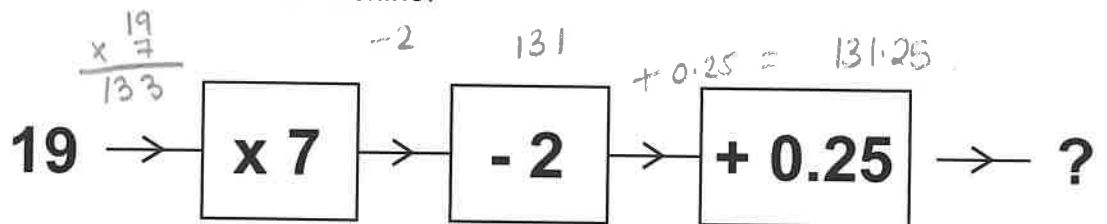
32

What shape has 3 sides of equal length and 3 equal angles?

- A equilateral triangle
- B right-angled triangle
- C trapezium
- D isosceles triangle
- E scalene triangle

33

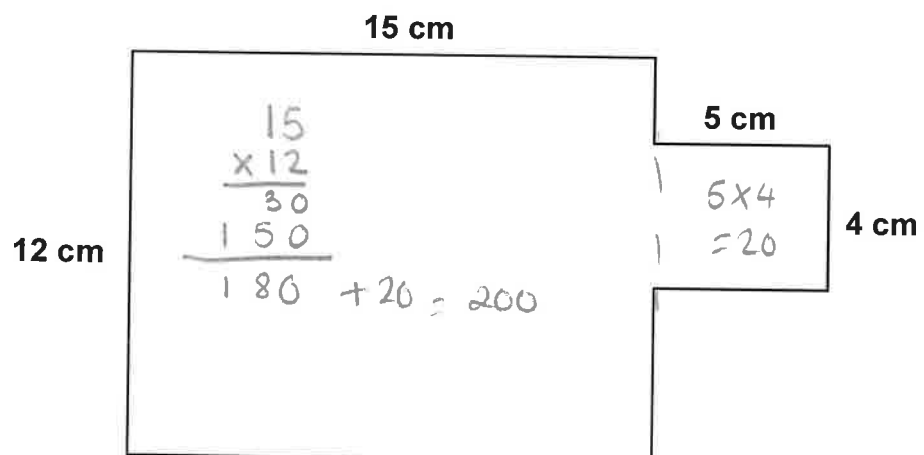
Look at this number machine.



What is the final number if the starting number in is 19?

- A 103
- B 131.25
- C 131.75
- D 130.5
- E 130.25

34



What is the area of this shape in cm^2 ?

- A 170 cm^2
- B 180 cm^2
- C 190 cm^2
- D 200 cm^2
- E 210 cm^2

35

The scale on a map is 1:125000

$$\begin{array}{r} \times 4 \\ \hline 500000 \end{array}$$

What actual distance in kilometres is represented by 4 cm on the map?

- A 5 km B 50 km C 500 km D 5000 km E 50000 km

36

Donald starts work at 08:45 and finishes at 17:15 Monday to Friday. He has two breaks each day, one between 10:15 and 10:30 and another between 12:45 and 13:30.

$$\underline{8 \text{ hr}} + 30 \text{ mins}$$

$$\underline{15 \text{ min}} = 1 \text{ hr break}$$

The rest of the time is spent working.

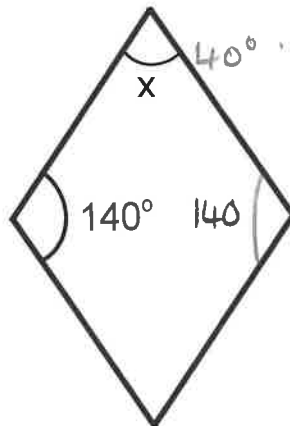
$$= 7 \text{ hr } 30 \text{ min total}$$

$$\begin{array}{r} \times 60 \\ \hline 420 + 30 \\ \hline = 450 \end{array}$$

What is the total time in minutes that Donald spends working each day?

- A 510 B 390 C 450 D 480 E 420

37



$$\begin{array}{r} 140 \\ + 140 \\ \hline 280 \end{array}$$

$$\begin{array}{r} 280 \\ - 280 \\ \hline 80 + 2 = 40 \end{array}$$

What is the size of angle x in this rhombus?

- A 140° B 80° C 90° D 45° E 40°

38

Which of the following is the best unit to measure the width of a swimming pool?

- A litres
- B kilometres
- C millilitres
- D kilograms
- E metres**

39

H T U
H T U
 73 4 01

The 3 in this number is worth 3000.

What is the 4 worth?

- A 40
- B 400**
- C 4000
- D 4
- E 73400

40

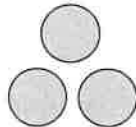
Harry is making patterns using circles.

△ numbers

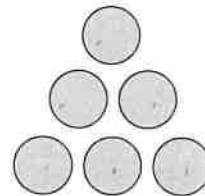
P1 = 1
P2 = 3 +2
P3 = 6 +3
P4 = 10 +4
P5 = 15 +5
P6 = 21 +6
P7 = 28 +7



Pattern 1



Pattern 2



Pattern 3

How many circles would Harry need to create the seventh pattern?

- A 21
- B 20
- C 28**
- D 23
- E 24

41

Which number is NOT a factor of 64?

A 6

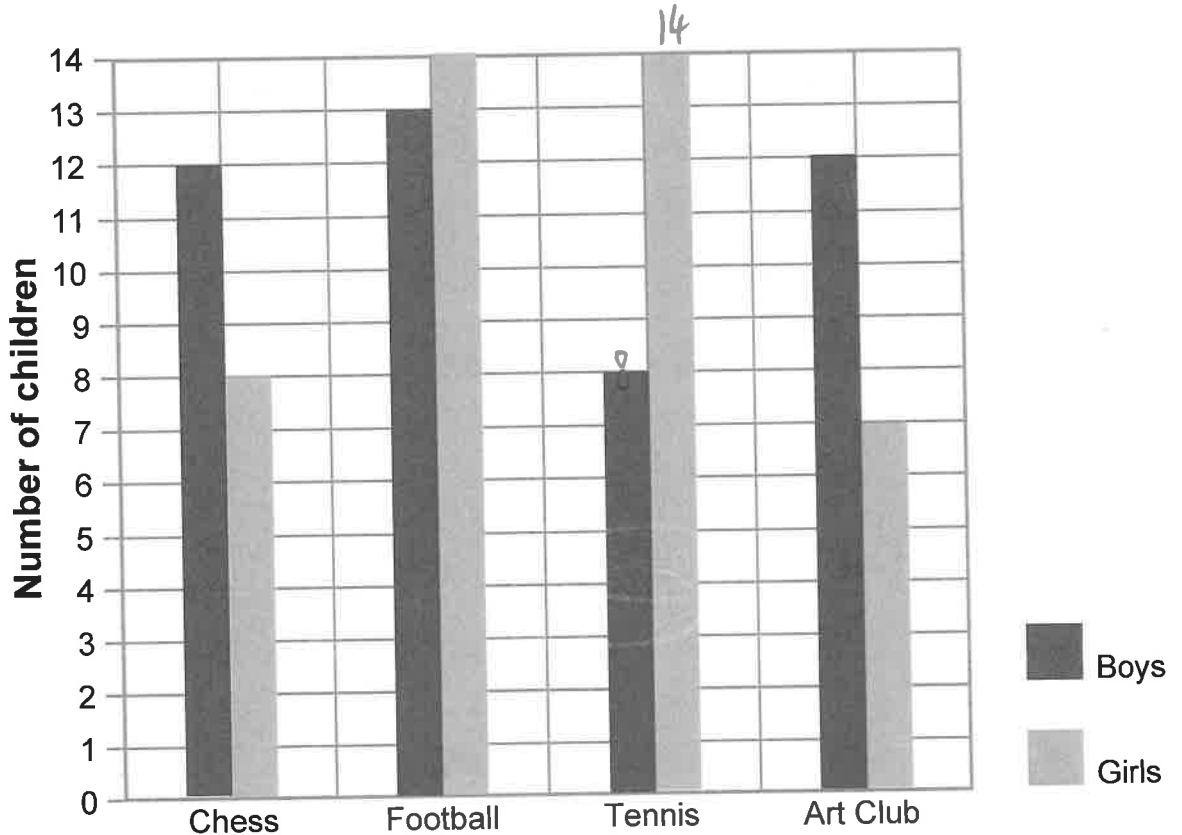
B 8 ✓

C 16 ✓

D 32 ✓

E 4 ✓

42



Favourite hobby

$$8 + 14 = 22$$

$$\frac{22}{88} = \frac{2}{8}$$

$$= \frac{1}{4}$$

The bar chart shows the favourite hobby of boys and girls. 88 children were asked to choose their favourite hobby.

What fraction of children chose tennis?

A $\frac{1}{2}$

B $\frac{1}{8}$

C $\frac{3}{4}$

D $\frac{1}{4}$

E $\frac{3}{8}$

43

416.25

What is four hundred and sixteen and a quarter as a decimal number?

- A 416.75
- B 416.25**
- C 416.5
- D 416.4
- E 416 ¼

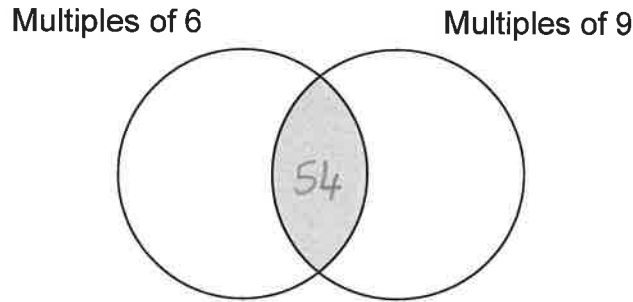
44

Which is the greatest length?

- A 45 cm
- B ^{15.5cm} 0.155 m
- C 50.5 cm
- D ^{39 cm} 390 mm
- E ^{51cm} 0.51 m**

45

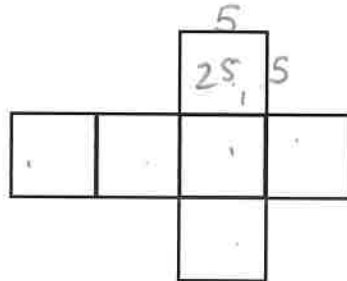
Which number belongs in the shaded section of this diagram?



- A 32
- B 56
- C 69
- D 54**
- E 15

46

This net can be folded to form a cube with a side of 5 cm.



$$\begin{array}{r} 25 \\ \times 6 \\ \hline 150 \text{ cm} \end{array}$$

What is the area of the net?

- A 25 cm²
- B 180 cm²
- C 30 cm²
- D 125 cm²
- E 150 cm²**

47

47.86 x 10 =

- A 4786
- B 4.786
- C 478.6
- D 0.4786
- E 47860

48

Which of these is the smallest?

- A 0.05
- B ^{0.03} 3%
- C ^{0.04} 1/25
- D ^{0.02} 1/50
- E 0.01

49

Betty buys a bottle of water in a shop with a £1 coin. She gets one coin back.

Which of these amounts could be the cost of the bottle of water?

- A 80p
_{20p}
- B 65p
_{35p}
- C 70p
_{30p}
- D 85p
_{15p}
- E 55p
_{45p}

50

A two-litre bottle of orange squash is mixed with six times as much water. ^{2 ltrs} 2x6 = 12 + 2 = 14 ltrs

1ltr = 4 250

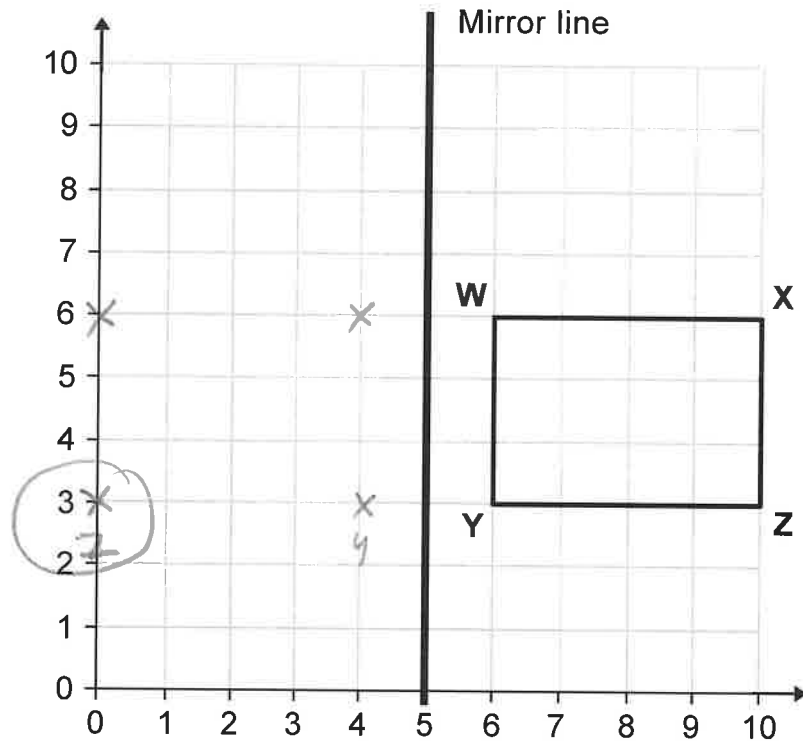
How many 250 ml glasses can be filled with the diluted squash?

- A 24
- B 16
- C 56
- D 28
- E 48

$$\begin{array}{r}
 14 \\
 \times 4 \\
 \hline
 56
 \end{array}$$

For questions 51–56, you have to **write your answers** in the boxes provided on your answer sheet. The units of measurement have been given.

51



The rectangle WXYZ is reflected in the mirror line. $(0,3)$

What will the new coordinates of point Z be?

52

You multiply a number by 3.
 Your answer is doubled, then divided by 10.
 The result is 9.

$$9 \times 10 = 90$$

$$90 \div 2 = 45$$

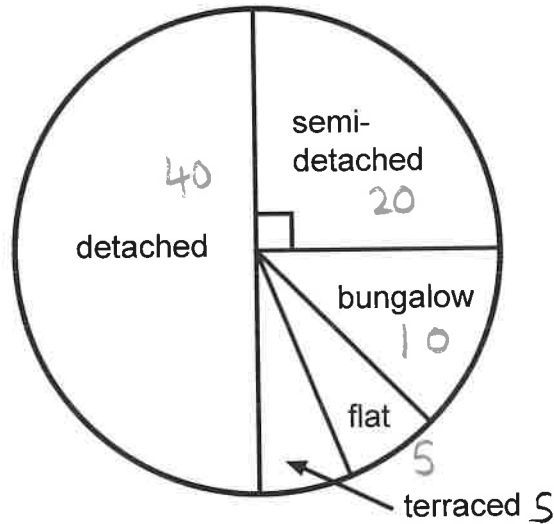
What number did you start with?

$$3 \overline{) 45} \begin{matrix} 15 \\ \underline{45} \\ 0 \end{matrix}$$

15

53

The pie chart shows the types of houses 80 year 6 pupils live in.



Half as many children live in a bungalow than a semi-detached house.
 An equal amount of children live in a flat and a terraced house.

How many children live in a flat?

5 children

54

Acorn nursery children record all the colours of cars they see on a walk.
 They put the information into a frequency table.

Colour of car	Frequency
Blue	5
Red	10
Silver	14
Black	+ 12 = 41
White	? 7

$$48 - 41 = 7$$

The children saw 48 cars altogether.

How many white cars did they see?

7 white cars

55

What number should go in the box?

$$3^3 \times 4 = \boxed{108}$$

$$\begin{array}{r} 3 \times 3 \times 3 = 27 \\ \times 24 \\ \hline 108 \end{array}$$

56

Look at the numbers in the box below.

$\textcircled{11}$	27	45
39	14	$\boxed{64}$

$$\begin{array}{r} 64 \\ - 11 \\ \hline 53 \end{array}$$

What number do you get if you subtract the prime number from the square number?

$$\textcircled{53}$$

Copyright © The Transfer Test, 2025

All rights reserved, including translation.
No part of this booklet may be photocopied, modified or
otherwise reproduced without prior written permission.

Printed in Northern Ireland.

THE  TRANSFER TEST

www.thetransfertest.com | sales@thetransfertest.com