

THE TRANSFER TEST

www.thetransfertest.com | sales@thetransfertest.com

Teacher's copy.

P7

School Edition

Practice Test Paper 4

Time: 60 minutes

VERSION 2 (with Practice Test section)

for SEAG Entrance Assessment

English - Practice Test

In this question there is either **one** punctuation mistake or **no** punctuation mistake. Find the group of words with the mistake in it and mark its letter on your answer sheet. **If there is no mistake, mark N.**

P1 Henry was flying to paris at the weekend, and he couldn't wait.
A B C D

In this question you have to choose the **best** word to complete the sentence, so that it makes sense and is written in correct English. Choose **the** best answer and mark its letter on your answer sheet.

P2 They had discovered the bones of a dinosaur that was
closing close closed closer closely related to a triceratops.
A B C D E

In this question there is either **one** spelling mistake or **no** spelling mistake. Find the group of words with the mistake in it and mark its letter on your answer sheet. **If there is no mistake, mark N.**

P3 It was cheeper for them to pay individually rather than pay for a group booking.
A B C D

Read this passage to yourself.

One morning, when Kit and Kat ran out early to feed their ducklings, the frost nipped their noses and ears.

"It's getting colder every day. Very soon winter will come," Kat said.

They ran down to the canal. The old goose and the gander and the goslings—now half grown—were standing on the bank, looking unhappy: there was a thin sheet of ice all over the canal, and they could not go swimming.

Kit took a stick and broke the ice. Thin sheets of it, like pieces of broken glass, were soon floating about; and the old goose, the gander, and all the goslings went down the bank in a procession into the water.

They swam about among the pieces of ice for a while, but it was so cold that they soon came up on the bank into the sun again and wiggled their tails to shake out the water. Then they all sat down in the sun to get their feet warm.

Answer this question. Choose **one** answer from the options below and mark its letter on your answer sheet.

P4 Why were the old goose, gander and goslings unhappy?

- A they were too cold
- B they were waiting for Kit and Kat to feed them
- C they didn't like being wet
- D they couldn't swim because of the ice
- E they didn't like swimming amongst broken ice

For this question, you have to **write your answer** in the box provided on your answer sheet (box P5).

P5 Which part of speech is 'nipped' as it appears in the passage? (line 1)



Maths - Practice Test

P6

Which one of these angles is an acute angle?

- A 100° B 180° C 200° D 70° E 90°

P7

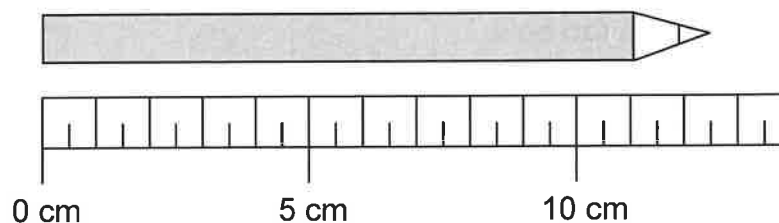
Below is part of a train timetable for five trains from Belfast to Dublin.

	Train A	Train B	Train C	Train D	Train E
Belfast	09:15	11:20	13:15	15:20	17:15
Dublin	11:18	13:18	15:21	17:36	19:28

Which train takes the shortest time to go from Belfast to Dublin?

- A A B B C C D D E E

P8



How long is the pencil?

- A 10.5 cm B 11 cm C 11.5 cm D 12 cm E 12.5 cm

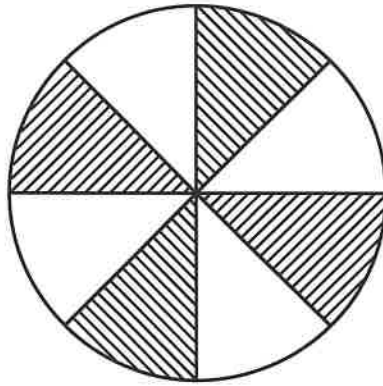
For these questions you have to **write your answers** in the boxes provided on your answer sheet (box P9 and P10). The units of measurement have been given.

P9

What number would go in the box?

$$\frac{18}{30} = \frac{\square}{5}$$

P10



What percentage of this circle is shaded?



English - Main Test

In this exercise there are some mistakes with **punctuation** or use of **capital letters**. On each numbered line there is either **one** mistake or **no** mistake. Find the group of words with the mistake in it and **mark its letter on your answer sheet**. If there is **no mistake**, mark **N**.

Punctuation Exercise

1 Sarah! there you are! You were meant to meet us an hour ago!
A B C D

2 Others, of course, would have noticed that Eloise's performance was the best.
A B C D N

3 'Stop' she yelled. 'You've forgotten your hockey stick and games kit!'
A B C D

4 'She didn't even ask you to come along,' Sarah sighed. 'You would
be safer at home?'
A B C D

5 Rohan had been saving his pocket money, he was hoping to buy a new bike.
A B C D

In this exercise you have to choose the **best** word, or **group of words**, to complete each numbered line so that the passage makes sense and is written in correct English. Choose the best answer and **mark its letter on your answer sheet**.

Grammar Exercise

6 They did a
A B C D E
job of cleaning the house.

7 The sun at 6am tomorrow.
A B C D E

8 They eventually invited us for dinner,
 reluctantly.
A B C D E

9 It going to be an easy task
A B C D E
to undertake.

10 train will you be taking
A B C D E
to Belfast?

In this exercise there are some **spelling** mistakes. On each numbered line there is either **one** mistake or **no** mistake. Find the group of words with the mistake in it and **mark its letter on your answer sheet**. If there is no mistake, mark **N**.

Spelling Exercise

11 James gave a concise explanation of where he was when the ^{incident} incedent took place.
A B C D

12 You are required to show identification before being ^{allowed} aloud to enter the concert hall.
A B C D

13 The detective was investigating an assassination attempt in the city.
A B C D N

14 It is ^{believed} beleived that the astronaut conducted a thorough check of
A B C
the space station.
D

15 There was a huge round of ^{applause} applawse from the audience at the
A B C
end of the ceremony.
D

Read the **whole** passage carefully, then answer the questions that follow.

The Velveteen Rabbit

1. There was a person called Nana who ruled the nursery. Sometimes she took no notice of
2. the playthings lying about, and sometimes, for no reason whatever, she went swooping
3. about like a great wind and hustled them away in cupboards. She called this "tidying up,"
4. and the playthings all hated it, especially the tin ones. The Rabbit didn't mind it so much, for
5. wherever he was thrown he came down soft.

6. One evening, when the Boy was going to bed, he couldn't find the china dog that always
7. slept with him. Nana was in a hurry, and it was too much trouble to hunt for china dogs at
8. bedtime, so she simply looked about her, and seeing that the toy cupboard door stood open,
9. she made a swoop.

10. "Here," she said, "take your old Bunny! He'll do to sleep with you!" And she dragged the
11. Rabbit out by one ear, and put him into the Boy's arms.

12. That night, and for many nights after, the Velveteen Rabbit slept in the Boy's bed. At first he
13. found it rather uncomfortable, for the Boy hugged him very tight, and sometimes he rolled
14. over on him, and sometimes he pushed him so far under the pillow that the Rabbit could
15. scarcely breathe. And he missed, too, those long moonlight hours in the nursery, when all
16. the house was silent, and his talks with the Skin Horse. But very soon he grew to like it, for
17. the Boy used to talk to him, and made nice tunnels for him under the bedclothes that he said
18. were like the burrows the real rabbits lived in. And they had splendid games together, in
19. whispers, when Nana had gone away to her supper and left the night-light burning on the
20. mantelpiece. And when the Boy dropped off to sleep, the Rabbit would snuggle down close
21. under his little warm chin and dream, with the Boy's hands clasped close round him all night
22. long.

23. And so time went on, and the little Rabbit was very happy—so happy that he never noticed
24. how his beautiful velveteen fur was getting shabbier and shabbier, and his tail becoming
25. unsewn, and all the pink rubbed off his nose where the Boy had kissed him.

26. Spring came, and they had long days in the garden, for wherever the Boy went the Rabbit
27. went too. He had rides in the wheelbarrow, and picnics on the grass, and lovely fairy huts
28. built for him under the raspberry canes behind the flower border.

29. And once, when the Boy was called away suddenly to go out to tea, the Rabbit was left out
30. on the lawn until long after dusk, and Nana had to come and look for him with the candle
31. because the Boy couldn't go to sleep unless he was there. He was wet through with the dew
32. and quite earthy from diving into the burrows the Boy had made for him in the flower bed,
33. and Nana grumbled as she rubbed him off with a corner of her apron.

34. "You must have your old Bunny!" she said. "Fancy all that fuss for a toy!"

35. The Boy sat up in bed and stretched out his hands.

36. "Give me my Bunny!" he said. "You mustn't say that. He isn't a toy. He's REAL!"

37. When the little Rabbit heard that he was happy, for he knew that what the Skin Horse had
38. said was true at last. The nursery magic had happened to him, and he was a toy no longer.
39. He was Real. The Boy himself had said it.

40. That night he was almost too happy to sleep, and so much love stirred in his little sawdust
41. heart that it almost burst. And into his boot-button eyes, that had long ago lost their polish,
42. there came a look of wisdom and beauty, so that even Nana noticed it next morning when
43. she picked him up, and said, "I declare if that old Bunny hasn't got quite a knowing
44. expression!"

45. That was a wonderful Summer!

46. Near the house where they lived there was a wood, and in the long June evenings the Boy
47. liked to go there after tea to play. He took the Velveteen Rabbit with him, and before he
48. wandered off to pick flowers, or play at brigands among the trees, he always made the
49. Rabbit a little nest somewhere among the bracken, where he would be quite cosy, for he was
50. a kind-hearted little boy and he liked Bunny to be comfortable. One evening, while the Rabbit
51. was lying there alone, watching the ants that ran to and fro between his velvet paws in the
52. grass, he saw two strange beings creep out of the tall bracken near him.

53. They were rabbits like himself, but quite furry and brand-new. They must have been very well
54. made, for their seams didn't show at all, and they changed shape in a queer way when they
55. moved; one minute they were long and thin and the next minute fat and bunchy, instead of
56. always staying the same like he did. Their feet padded softly on the ground, and they crept
57. quite close to him, twitching their noses, while the Rabbit stared hard to see which side the
58. clockwork stuck out, for he knew that people who jump generally have something to wind
59. them up. But he couldn't see it. They were evidently a new kind of rabbit altogether.

Please answer these questions. (Look at the passage again if you need to.)
You should choose the **best** answer and mark its letter on your answer sheet.

16

'like a great wind' (line 3)

What does this suggest about the way Nana tidied up?

- A Nana tidied very slowly.
- B Nana made more of a mess.
- C Nana broke things when she tidied.
- D Nana opened the windows when she tidied.
- E Nana stormed around when she tidied.

17

Look at lines 1-5.

Why did the Rabbit not mind when Nana 'tidied up'?

- A He enjoyed being held.
- B He liked being thrown.
- C It made him feel real.
- D His material meant he had a gentle landing.
- E He liked a tidy nursery.

18

Why does Nana give the boy 'his old bunny' to sleep with?

- A She can't find his china dog.
- B She doesn't have time to look for his china dog.
- C Because the toy cupboard door was open.
- D Because he always slept with the china dog and needed a change.
- E Because the bunny wanted to sleep with the boy.

19

'...he pushed him so far under the pillow that the Rabbit could scarcely breathe' (lines 14-15)

What does this suggest the boy was doing?

- A Trying to suffocate the rabbit.
- B Sleeping.
- C Punishing the rabbit for not being the china dog.
- D Playing games.
- E Trying to hide the rabbit.

20

'I declare if that old Bunny hasn't got quite a knowing expression'
(lines 43-44)

What does this tell you about the rabbit?

- A He looked happy.
- B He had fear in his eyes.
- C He looked wise.
- D His eyes were dull.
- E He was shabby looking.

21

Look at lines 46-52.

What do we know about the boy's character from this paragraph?

- A He is forgetful.
- B He is mean.
- C He is cold-hearted.
- D He is anxious.
- E He is considerate.

22

Look at lines 53-59.

What made the 'brand new' rabbits different from the velveteen rabbit?

- A They were real.
- B They were better made.
- C They had a clockwork.
- D They changed shape.
- E Their seams were hidden.

For these questions you have to **write your answers**, neatly, in the boxes provided on your answer sheet.

23

What was the velveteen rabbit's heart made from?

sawdust

24

Look at lines 23-25. How many areas of the rabbit's body are starting to look 'shabby'?

three areas

25

Which one word in lines 12-15 means the same as 'only just'?

scarcely

26

Which seven-word phrase in lines 53-55 means that the new rabbits shifted form in a strange manner?

they changed shape in a queer way.

27

Which one part of speech are the following as they appear in the passage?

into (line 11), under (line 14), near (line 46), between (line 51)

prepositions

28

Which part of speech is 'slept' as it appears in the passage? (line 12)

Verb.

Maths - Main Test

29

$$x = 5$$
$$y = 15$$

$$x = 5 \times 5 \times 5 = 125$$
$$\begin{array}{r} 125 \\ - 15 \\ \hline 110 \end{array}$$

$$x^3 - y = ?$$

A 100

B 0

C 110

D 10

E 25

30

How many minutes are there in one day?

$$\begin{array}{r} 24 \\ \times 60 \\ \hline 1440 \end{array}$$

A 2400

B 1400

C 1200

D 1500

E 1440

31

Which decimal is equivalent to 40%?

A 0.4

B 4.0


C 0.04

D 1.4

E 0.14

32

This machine adds 7 and then divides by 4.



Which number comes out?

A 4

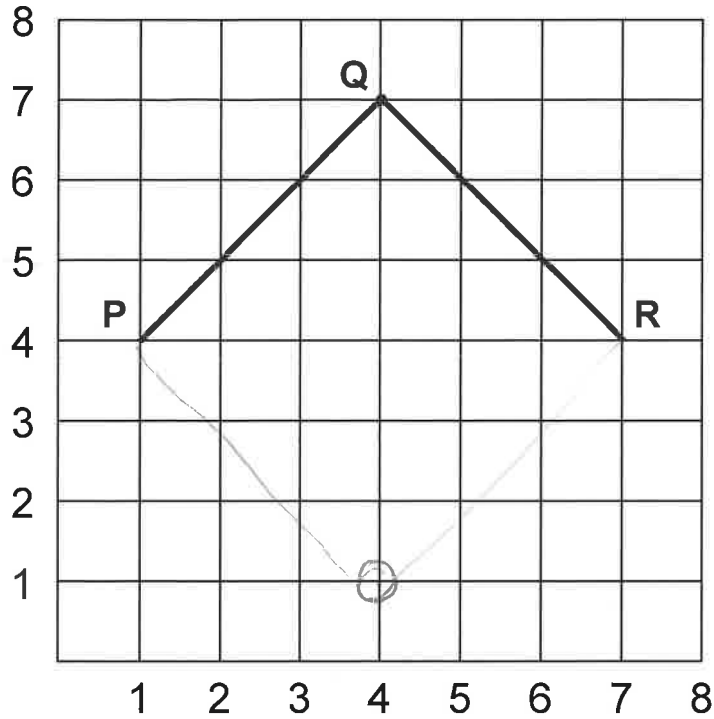
B 4.5

C 5

D 5.5

E 6

33



When point S is added, PQRS is a square.

What are the coordinates of point S?

- A (4, 1)
 B (1, 4)
 C (0, 4)
 D (4, 0)
 E (3, 1)

34

The table below shows how many children went on the annual school trip.

	Annual School Trip Attendance		
	2021	2022	2023
Boys	19	14	12
Girls	28	19	21

68
 - 45

 23

45
68

How many more girls attended over the three years than boys?

- A 22
 B 23
 C 27
 D 29
 E 33

35

A roll of tape measures 2.5 metres long.

Three pieces of tape measuring 25 cm each are cut from the roll.

$$25 \times 3 = 75$$

$$\begin{array}{r} 250 \\ - 75 \\ \hline 175 = 1.75\text{m} \end{array}$$

How much tape is left on the roll?

- A 2.25 m B 75 cm C 125 cm **D 1.75 m** E 175 m

36

Magazines are being packed into separate boxes, each box contains 30 magazines.

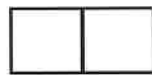
$$270 \div 30 = 9$$

How many boxes are needed for 270 magazines?

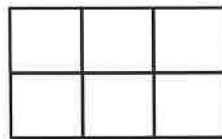
- A 8100 B 90 C 120 **D 9** E 10

37


This pattern is made from squares.



Pattern 1



Pattern 2



Pattern 3

If this series of patterns is continued, what is the total number of squares in Pattern 5?

- A 25 B 20 **C 30** D 35 E 56

$$\begin{array}{l} 1 = 2 \\ 2 = 6 \\ 3 = 12 \\ 4 = 20 \\ 5 = 30 \end{array}$$

+4
+6
+8
+10

38

A scarf has been reduced by 20%.
The original price was £12.50.

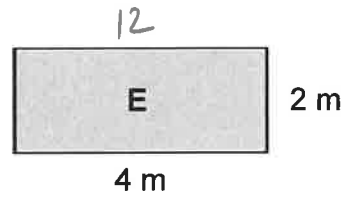
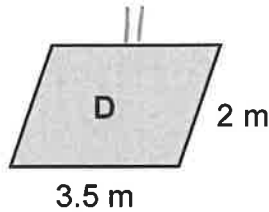
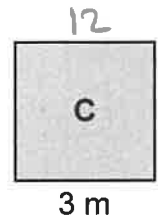
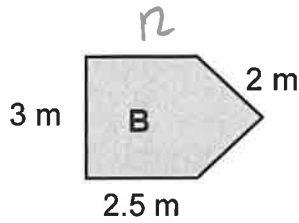
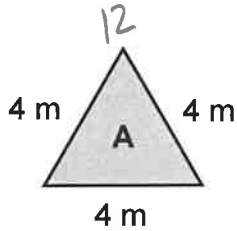
$$\begin{array}{r} 12.50 \\ - 2.50 \\ \hline 10.00 \end{array}$$

$$\begin{array}{l} 10\% = 1.25 \\ 20\% = 2.50 \end{array}$$

How much does the scarf cost now?

- A** £10.00 **B** £10.50 **C** £9.50 **D** £9.25 **E** £10.25

39



Four of the above shapes have the same perimeter.

Which shape has a different perimeter from the others?

- A** A **B** B **C** C **D** D **E** E

40

230 people attend a show.
 $\frac{2}{5}$ of them have a VIP ticket.

$$\begin{array}{r} 046 \\ 5 \overline{) 230} \end{array}$$

$$\begin{array}{r} 46 \\ \times 3 \\ \hline 138 \end{array}$$

How many people do NOT have a VIP ticket?

- A** 92 **B** 46 **C** 138 **D** 130 **E** 230

41

The temperature in London was 6°C.
During the night, the temperature dropped by 11°C.

What was the temperature during the night?

A -17°C

B -6°C

C -11°C

D -4°C

E -5°C

42

A bag contains five colours of marbles: red, blue, black, white and green.
There is an equal number of each colour in the bag. $\frac{1}{5}$

What is the probability that a black or white marble would be picked out of the bag?

A 10%

B 20%

C 30%

D 40%

E 50%

$\frac{2}{5} = 40\%$

43

Salt and Vinegar		42
Cheese and onion		
Ready salted		30
Beef		
Prawn cocktail		

Key:

= 12 children

= 6 children

The pupils of a school did a survey on favourite crisp flavours.
This pictogram shows the results.

$42 - 30 = 12$

How many more children liked salt and vinegar than ready salted?

A 1

B 12

C 15

D 10

E 12.5

1, 3, 6, 10, 15, 21, 28

44

Which number is a triangular number?

- A 9
- B 11
- C 16
- D 21**
- E 25

45

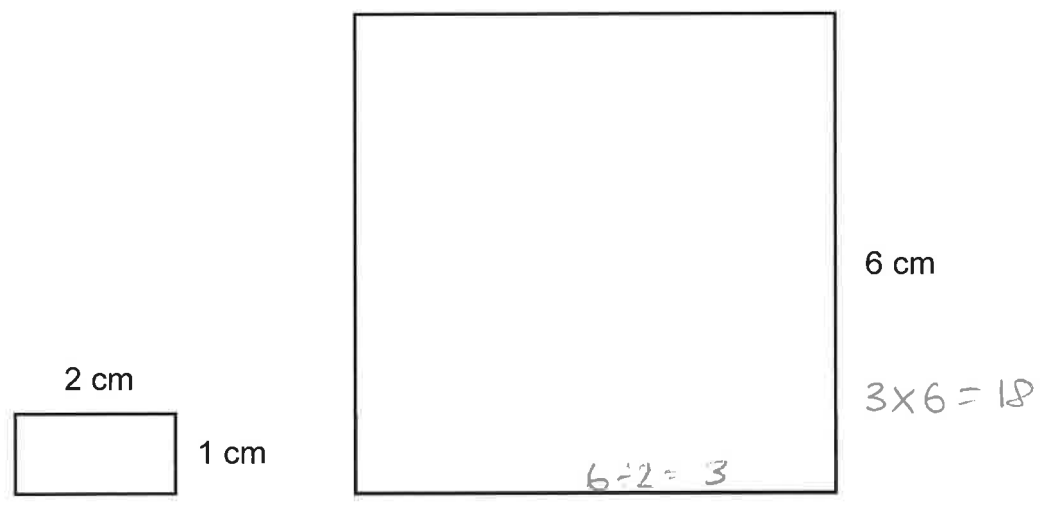
A television programme finished at five to six in the evening.
 It lasted for two and one-quarter hours.

5:55 ⁻² 3:55 - 15 = 3:40

What time did it start?

- A 13:40
- B 03:30
- C 15:30
- D 03:40
- E 15:40**

46



How many small rectangles will fit into the large square?

- A 24
- B 12
- C 18**
- D 36
- E 9

47

Jonah saves £7.62 of his pocket money.

£2 = 3
 £1 = 1
 50p = 1
 10p = 1
 2p = 1

What is the least amount of coins Jonah could have?

- A 7 coins**
- B 6 coins
- C 5 coins
- D 8 coins
- E 9 coins

48

How many ^{250ml} quarter litre glasses can be filled from a container which holds 12.5 litres of fruit juice?

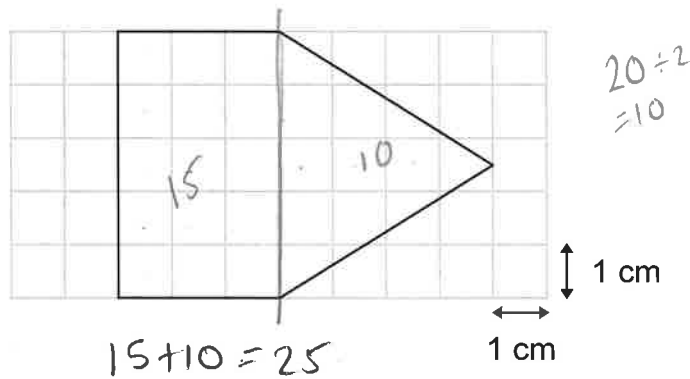
- A 50 glasses
- B 48 glasses
- C 31 glasses
- D 5 glasses
- E 52 glasses

$$12 \times 4 = 48$$

$$+ 2 = 50$$

49

The shape below is drawn on a centimetre square coordinate grid.



What is the area of the shape?

- A 30 cm²
- B 25 cm²
- C 40 cm²
- D 35 cm²
- E 24 cm²

50

Look at the numbers in the box below.

27	19 P	8
49	33	10

$$\begin{array}{r} 49 \\ - 19 \\ \hline 30 \end{array}$$

What number do you get if you subtract the prime number from the square number?

- A -9
- B 14
- C -11
- D 30
- E 8

For questions 51–56, you have to **write your answers** in the boxes provided on your answer sheet. The units of measurement have been given.

51


The time is 'half past eight in the evening'.

What is this time as a 24-hour clock time?

20:30

52

A shaded shape is drawn on the grid below.
Each square on the grid has a side of 1 cm.



mirror line

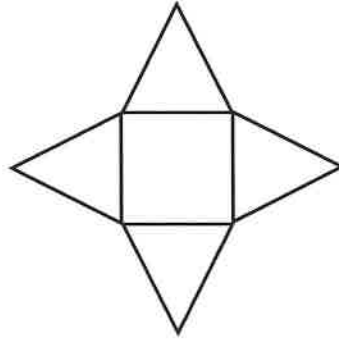
$$16 \times 2 = 32$$

The shaded shape is reflected in the mirror line.

What is the total area of the shaded shape and its reflection?

32 cm²

53

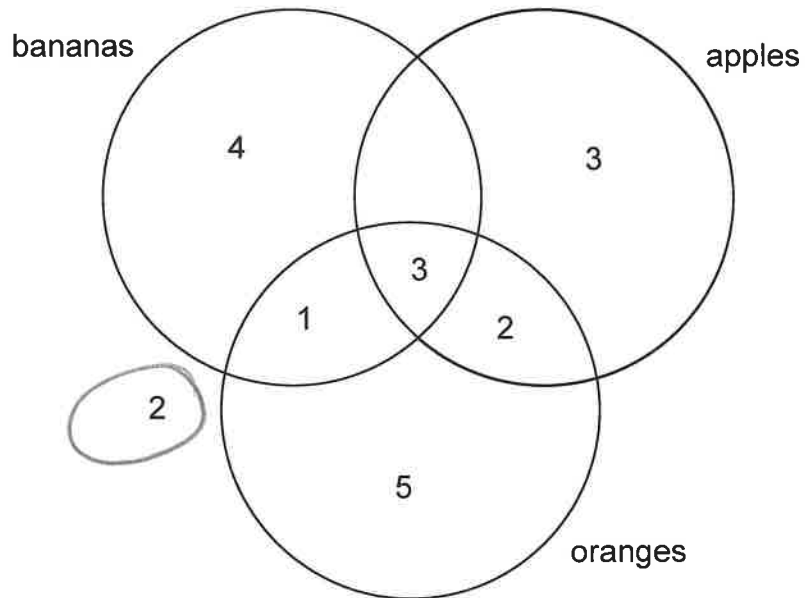


This net can be folded to form which 3-dimensional shape?

square based pyramid.

54

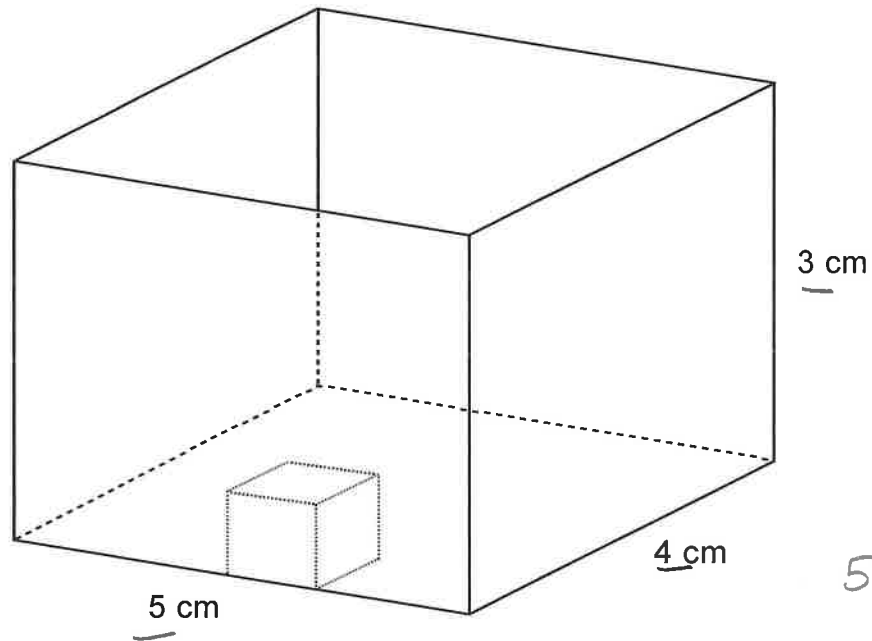
The Venn diagram shows the favourite fruits of a year 3 class.



How many children did NOT like bananas, apples or oranges?

2

55



$$\begin{array}{r} 5 \times 4 = 20 \\ \times 3 \\ \hline 60 \end{array}$$

How many cubes of sides 1 cm will fit into the cuboid above?

60 cubes.

56

You multiply a number by itself.
The answer is then multiplied by the number you started with. The new number is 125.

$$5 \times 5 \times 5 = 125$$

What number did you start with?

5

Copyright © The Transfer Test, 2025

All rights reserved, including translation.
No part of this booklet may be photocopied, modified or
otherwise reproduced without prior written permission.

Printed in Northern Ireland.

THE | TRANSFER TEST

www.thetransfertest.com | sales@thetransfertest.com



Candidate's Name _____
 School Name _____

DATE OF TEST
 Day | Month | Year
 | | |

CANDIDATE NUMBER
 | | | | | | | | | |

SCHOOL NUMBER
 | | | | | | | |

DATE OF BIRTH
 Day | Month | Year
 | | | | | |

Please mark boxes with a thin horizontal line like this .

ENGLISH - PRACTICE TEST

P1 A <input type="checkbox"/> B <input type="checkbox"/> C <input type="checkbox"/> D <input type="checkbox"/> N <input type="checkbox"/>	P2 A <input type="checkbox"/> B <input type="checkbox"/> C <input type="checkbox"/> D <input type="checkbox"/> E <input type="checkbox"/>	P3 A <input type="checkbox"/> B <input type="checkbox"/> C <input type="checkbox"/> D <input type="checkbox"/> N <input type="checkbox"/>	P4 A <input type="checkbox"/> B <input type="checkbox"/> C <input type="checkbox"/> D <input type="checkbox"/> E <input type="checkbox"/>	
---	---	---	---	--

MATHS - PRACTICE TEST

P6 A - 100° <input type="checkbox"/> B - 180° <input type="checkbox"/> C - 200° <input type="checkbox"/> D - 70° <input type="checkbox"/> E - 90° <input type="checkbox"/>	P7 A - A <input type="checkbox"/> B - B <input type="checkbox"/> C - C <input type="checkbox"/> D - D <input type="checkbox"/> E - E <input type="checkbox"/>	P8 A - 10.5 cm <input type="checkbox"/> B - 11 cm <input type="checkbox"/> C - 11.5 cm <input type="checkbox"/> D - 12 cm <input type="checkbox"/> E - 12.5 cm <input type="checkbox"/>	P9 _____ _____	P10 _____ %
--	---	---	-----------------------------	-----------------------

ENGLISH - MAIN TEST

1 A <input type="checkbox"/> B <input type="checkbox"/> C <input type="checkbox"/> D <input type="checkbox"/> N <input type="checkbox"/>	2 A <input type="checkbox"/> B <input type="checkbox"/> C <input type="checkbox"/> D <input type="checkbox"/> N <input type="checkbox"/>	3 A <input type="checkbox"/> B <input type="checkbox"/> C <input type="checkbox"/> D <input type="checkbox"/> N <input type="checkbox"/>	4 A <input type="checkbox"/> B <input type="checkbox"/> C <input type="checkbox"/> D <input type="checkbox"/> N <input type="checkbox"/>	5 A <input type="checkbox"/> B <input type="checkbox"/> C <input type="checkbox"/> D <input type="checkbox"/> N <input type="checkbox"/>
--	--	--	--	--

6 A <input type="checkbox"/> B <input type="checkbox"/> C <input type="checkbox"/> D <input type="checkbox"/> E <input type="checkbox"/>	7 A <input type="checkbox"/> B <input type="checkbox"/> C <input type="checkbox"/> D <input type="checkbox"/> E <input type="checkbox"/>	8 A <input type="checkbox"/> B <input type="checkbox"/> C <input type="checkbox"/> D <input type="checkbox"/> E <input type="checkbox"/>	9 A <input type="checkbox"/> B <input type="checkbox"/> C <input type="checkbox"/> D <input type="checkbox"/> E <input type="checkbox"/>	10 A <input type="checkbox"/> B <input type="checkbox"/> C <input type="checkbox"/> D <input type="checkbox"/> E <input type="checkbox"/>
--	--	--	--	---

11 A <input type="checkbox"/> B <input type="checkbox"/> C <input type="checkbox"/> D <input type="checkbox"/> N <input type="checkbox"/>	12 A <input type="checkbox"/> B <input type="checkbox"/> C <input type="checkbox"/> D <input type="checkbox"/> N <input type="checkbox"/>	13 A <input type="checkbox"/> B <input type="checkbox"/> C <input type="checkbox"/> D <input type="checkbox"/> N <input type="checkbox"/>	14 A <input type="checkbox"/> B <input type="checkbox"/> C <input type="checkbox"/> D <input type="checkbox"/> N <input type="checkbox"/>	15 A <input type="checkbox"/> B <input type="checkbox"/> C <input type="checkbox"/> D <input type="checkbox"/> N <input type="checkbox"/>
---	---	---	---	---

ENGLISH COMPREHENSION

16 A <input type="checkbox"/> B <input type="checkbox"/> C <input type="checkbox"/> D <input type="checkbox"/> E <input type="checkbox"/>	17 A <input type="checkbox"/> B <input type="checkbox"/> C <input type="checkbox"/> D <input type="checkbox"/> E <input type="checkbox"/>	18 A <input type="checkbox"/> B <input type="checkbox"/> C <input type="checkbox"/> D <input type="checkbox"/> E <input type="checkbox"/>	19 A <input type="checkbox"/> B <input type="checkbox"/> C <input type="checkbox"/> D <input type="checkbox"/> E <input type="checkbox"/>	20 A <input type="checkbox"/> B <input type="checkbox"/> C <input type="checkbox"/> D <input type="checkbox"/> E <input type="checkbox"/>	21 A <input type="checkbox"/> B <input type="checkbox"/> C <input type="checkbox"/> D <input type="checkbox"/> E <input type="checkbox"/>	22 A <input type="checkbox"/> B <input type="checkbox"/> C <input type="checkbox"/> D <input type="checkbox"/> E <input type="checkbox"/>
---	---	---	---	---	---	---

Please mark boxes with a thin horizontal line like this

ENGLISH COMPREHENSION continued

23

24

25

26

27

28

MATHS - MAIN TEST

29

A - 100

B - 0

C - 110

D - 10

E - 25

30

A - 2400

B - 1400

C - 1200

D - 1500

E - 1440

31

A - 0.4

B - 4.0

C - 0.04

D - 1.4

E - 0.14

32

A - 4

B - 4.5

C - 5

D - 5.5

E - 6

33

A - (4, 1)

B - (1, 4)

C - (0, 4)

D - (4, 0)

E - (3, 1)

34

A - 22

B - 23

C - 27

D - 29

E - 33

35

A - 2.25 m

B - 75 cm

C - 125 cm

D - 1.75 m

E - 175 m

36

A - 8100

B - 90

C - 120

D - 9

E - 10

37

A - 25

B - 20

C - 30

D - 35

E - 56

38

A - £10.00

B - £10.50

C - £9.50

D - £9.25

E - £10.25

39

A - A

B - B

C - C

D - D

E - E

40

A - 92

B - 46

C - 138

D - 130

E - 230

41

A - -17 °C

B - -6 °C

C - -11 °C

D - -4 °C

E - -5 °C

42

A - 10%

B - 20%

C - 30%

D - 40%

E - 50%

43

A - 1

B - 12

C - 15

D - 10

E - 12.5

44

A - 9

B - 11

C - 16

D - 21

E - 25

45

A - 13:40

B - 03:30

C - 15:30

D - 03:40

E - 15:40

46

A - 24

B - 12

C - 18

D - 36

E - 9

47

A - 7 coins

B - 6 coins

C - 5 coins

D - 8 coins

E - 9 coins

48

A - 50 glasses

B - 48 glasses

C - 31 glasses

D - 5 glasses

E - 52 glasses

49

A - 30 cm²

B - 25 cm²

C - 40 cm²

D - 35 cm²

E - 24 cm²

50

A - -9

B - 14

C - -11

D - 30

E - 8

51

52

_____ cm²

53

54

_____ children

55

_____ cubes

56