

2025-2026.

THE TRANSFER TEST

www.thetransfertest.com | sales@thetransfertest.com

Teachers copy.

P7

School Edition

Practice Test Paper 9

Time: 60 minutes

VERSION 2 (with Practice Test section)

for SEAG Entrance Assessment

Read this passage to yourself.

London is the capital city of England and the United Kingdom. With a population of over 8 million people, it's one of the most populous cities in Europe. One of the most iconic landmarks in London is the Tower of London, a historic castle located on the north bank of the River Thames. Built by William the Conqueror in the 11th century, the Tower has served various purposes throughout its long history, including as a royal palace, fortress and prison. Today, it's a popular tourist attraction where visitors can explore its ancient walls and marvel at the Crown Jewels. The River Thames is the longest river in England and has played a vital role in London's development as a major trading hub. The river is lined with famous landmarks, including the Houses of Parliament, with its iconic clock tower known as Big Ben, and the majestic Tower Bridge.

Answer this question. Choose **one** answer from the options below and mark its letter on your answer sheet.

P4 What is the Tower of London now used as?

- A a prison
- B a fortress
- C a royal palace
- D a tourist attraction
- E a symbol of London's maritime history

For this question, you have to **write your answer** in the box provided on your answer sheet (box P5).

P5 Which **one word** in lines 4-6 means means 'numerous or many'?

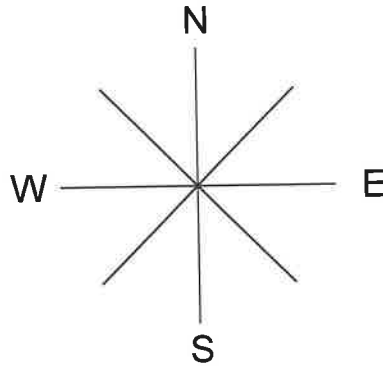


For these questions you have to **write your answers** in the boxes provided on your answer sheet (box P9 and P10). The units of measurement have been given.

P9

How many edges does a cuboid have?

P10



Noah is facing South-West.
He turns anti-clockwise through 90°

Which direction does he now face?



In this exercise you have to choose the **best** word, or **group of words**, to complete each numbered line so that the passage makes sense and is written in correct English. Choose the best answer and **mark its letter on your answer sheet**.

Grammar Exercise

6 We'd We're We've Were Were'nt like to go to France in
A B C D E

the summer holidays.

7 He is moved will move has moved moving move into his
A B C D E

new house at the end of this month.

8 Jessica was the tallest tall more tall taller the most tallest
A B C D E

than all of her classmates.

9 They had employed three
 cheves chef chefs chef's chefes for the kitchen.
A B C D E

10 They were running late for the cinema, so they
 recently later earlier already immediately went to their seats.
A B C D E

Read the **whole** passage carefully, then answer the questions that follow.

The Brook

1. I come from haunts of coot and hern,
2. I make a sudden sally,
3. And sparkle out among the fern,
4. To bicker down a valley.

5. By thirty hills I hurry down,
6. Or slip between the ridges,
7. By twenty thorps, a little town,
8. And half a hundred bridges.

9. Till last by Philip's farm I flow
10. To join the brimming river,
11. For men may come and men may go,
12. But I go on forever.

13. I chatter over stony ways,
14. In little sharps and trebles,
15. I bubble into eddying bays,
16. I babble on the pebbles.

17. With many a curve my banks I fret
18. By many a field and fallow,
19. And many a fairy foreland set
20. With willow-weed and mallow.

21. I chatter, chatter, as I flow
22. To join the brimming river,
23. For men may come and men may go,
24. But I go on forever.

25. I wind about, and in and out,
26. With here a blossom sailing,
27. And here and there a lusty trout,
28. And here and there a grayling,

Please answer these questions. (Look at the passage again if you need to.)
You should choose the **best** answer and mark its letter on your answer sheet.

16 Which of these statements about the poem's rhyme scheme is true?

- A the first and second lines of each verse rhyme
- B the first and third lines of each verse rhyme**
- C the third and fourth lines of each verse rhyme
- D the second and third lines of each verse rhyme
- E none of the lines in any of the verses rhyme

17 How many bridges does the brook pass?

- A fifty**
- B one hundred
- C twenty
- D thirty
- E ten

18 Look at lines 5-16.
What does the brook connect with?

- A a farm
- B a bridge
- C a ridge
- D a river**
- E a town

19 'I chatter over stony ways' (line 13)
What type of figurative language is the poet using here?

- A onomatopoeia
- B metaphor
- C personification**
- D simile
- E alliteration

25

Which one word in lines 1-4 means the same as quarrel?

bicker

26

The poet uses repetition of a word to describe the river.
What is the word?

brimming

27

Which one part of speech are the following as they appear in the passage?
upon (line 30), along (line 33), among (line 42), against (line 44)

prepositions.

28

Which part of speech is 'linger' as it appears in the passage? (line 47)

verb.

32

— 8 14 21 29 38
+6 +7 +8 +9

What is the first number in this sequence?

A 0

B 1

C 2

D 3

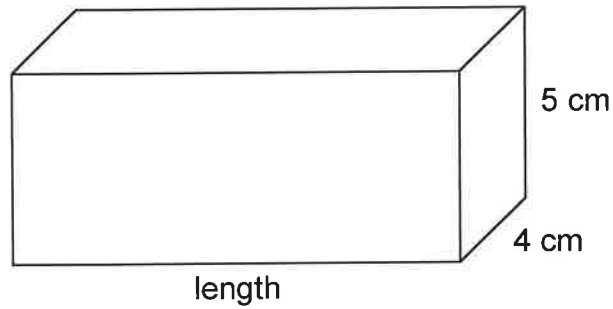
E 4

33

The cuboid below has a volume of 140 cm^3 .

$5 \times 4 = 20$

$140 \div 20 = 7$



What is the length of the cuboid?

A 7 cm

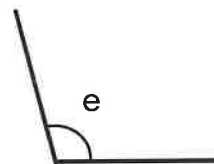

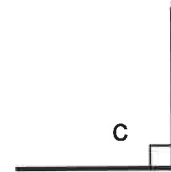
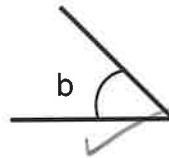
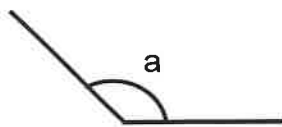
B 4 cm

C 8 cm

D 5 cm

E 6 cm

34



Which angle is an acute angle?

A a

B b

C c

D d

E e

38

Which of the following can hold about 250 ml of liquid?

- A a bath
 B a teaspoon
 C an egg cup
 D a swimming pool
 E a tea cup

39

Year 7 recorded how they travelled to school.
 $\frac{6}{8}$ of them travelled by car.

$$64 \div 8 = 8$$

$$8 \times 6 = 48$$

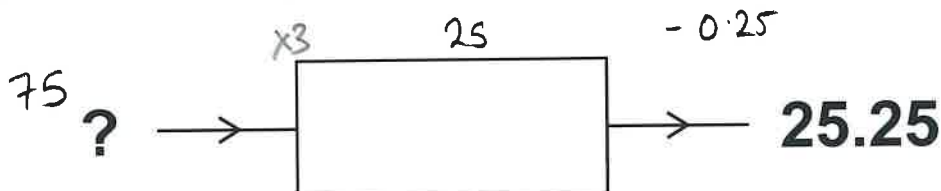
$$\begin{array}{r} 64 \\ - 48 \\ \hline 16 \end{array}$$

If there are 64 children altogether, how many did NOT travel by car?

- A 48 B 16 C 8 D 24 E 12

40

This machine divides by 3 and then adds 0.25.



Which number has been put in?

- A 8 B 75.25 C 8.25 D 75 E 8.5

41

Which number is a triangular number?

- A 6 B 9 C 16 D 18 E 20

Below is part of a bus timetable for five buses from London to Glasgow.

	Bus A	Bus B	Bus C	Bus D	Bus E
London	06:00	07:15	08:30	09:45	11:00
Glasgow	13:51	15:01	16:19	17:40	18:55

7h 51

7h 55

Which bus takes the least time to go from London to Glasgow?

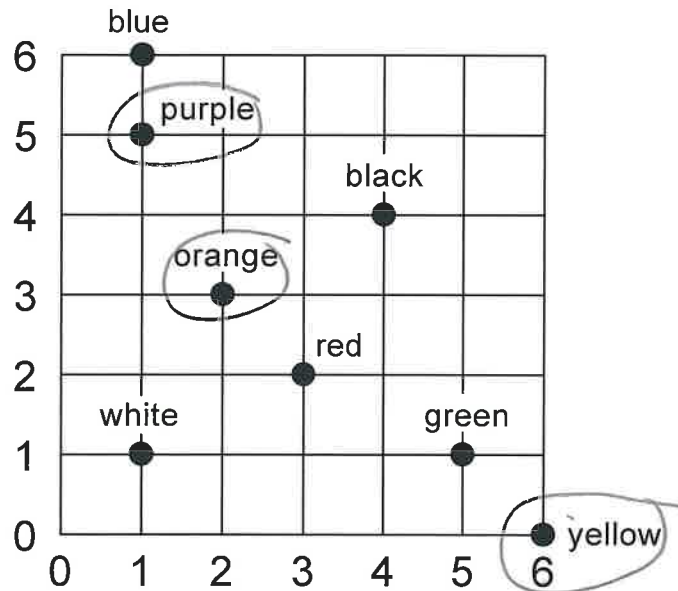
A A

B B

C C

D D

E E



Name the colours at these coordinates:

(1, 5), (2, 3), (6, 0)

A purple, orange, blue

B green, red, blue

C purple, orange, yellow

D green, red, yellow

E purple, red, blue

For questions 51–56, you have to **write your answers** in the boxes provided on your answer sheet. The units of measurement have been given.

51

This is a 'magic square' where the numbers in the rows and columns follow a logical sequence.

2×2	3×3	4×4	
?	9	16	
9	16	25	5×5
16	25	36	

What is the missing number?

4.

52

$$\frac{10}{25} = \frac{2}{5}$$

What percentage of this grid is shaded?

40%.

53

A bottle holds 2 litres of juice.
A glass can hold 300 ml of juice.

$$300 \times 6 = 1800$$

How many full glasses can be filled with the 2 litre bottle of juice?

6 glasses

