

2025/2026.

THE TRANSFER TEST

www.thetransfertest.com | sales@thetransfertest.com

Teacher's Copy

P7

School Edition

Practice Test Paper 3

Time: 60 minutes

VERSION 2 (with Practice Test section)

for SEAG Entrance Assessment

English - Practice Test

In this question there is either **one** punctuation mistake or **no** punctuation mistake. Find the group of words with the mistake in it and mark its letter on your answer sheet. **If there is no mistake, mark N.**

P1 She knew theyd have to wait patiently for the bus, but she just didn't want to.

A B C D

In this question you have to choose the **best** word to complete the sentence, so that it makes sense and is written in correct English. Choose **the** best answer and mark its letter on your answer sheet.

P2 Their dad put them to bed early

therefore although otherwise because however they were going on
A B C D E

holiday the next day.

In this question there is either **one** spelling mistake or **no** spelling mistake. Find the group of words with the mistake in it and mark its letter on your answer sheet. **If there is no mistake, mark N.**

P3 He'd started swiming lessons in February last year and was in level eight.

A B C D

Read this passage to yourself.

The Amazon rainforest is a vibrant ecosystem that stretches across South America, covering an area of approximately 6.7 million square kilometres. It's often referred to as the "lungs of the earth" because it produces 20% of the world's oxygen.

The Amazon rainforest is one of the most biodiverse places on the planet. It's estimated that there are around 390 billion individual trees belonging to 16,000 different species! The Amazon River, which flows through the heart of the rainforest, is the largest river in the world by discharge volume.

Answer this question. Choose **one** answer from the options below and mark its letter on your answer sheet.

P4 Why is the Amazon rainforest referred to as the 'lungs of the earth'?

- A because it stretches across South America
- B because it has the largest river
- C because it produces 20% of the world's oxygen
- D because it produces 20% of the world's carbon dioxide
- E because it isn't very big

For this question, you have to **write your answer** in the box provided on your answer sheet (box P5).

P5 Which **one word** in lines 1-3 means 'full of life'?



Maths - Practice Test

P6

How many sides does a pentagon have?

- A 3 B 4 C 5 D 6 E 7
-

P7

Which fraction is equivalent to 25%?

- A $\frac{1}{5}$ B $\frac{1}{2}$ C $\frac{1}{4}$ D $\frac{1}{6}$ E $\frac{1}{3}$
-

P8

Irsa is facing West.

She turns anti-clockwise through 90 degrees.

In which direction is she now facing?

- A South
B North-West
C North
D South-West
E East
-

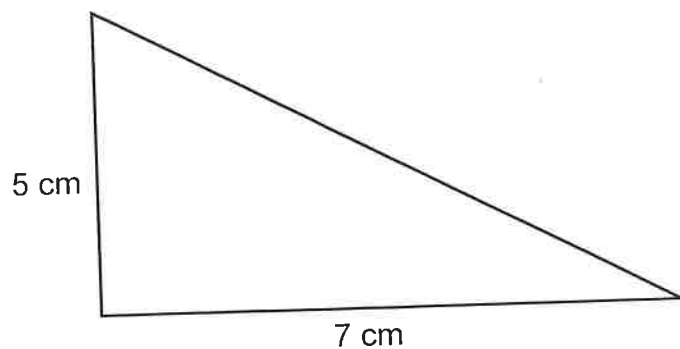
For these questions you have to **write your answers** in the boxes provided on your answer sheet (box P9 and P10). The units of measurement have been given.

P9

Sorcha is on holiday during all of June and July.

How many days altogether is Sorcha on holiday?

P10



What is the area of this right-angled triangle?



English - Main Test

In this exercise there are some mistakes with **punctuation** or use of **capital letters**. On each numbered line there is either **one** mistake or **no** mistake. Find the group of words with the mistake in it and **mark its letter on your answer sheet**. If there is no mistake, mark **N**.

Punctuation Exercise

1 George Best (born in Belfast) is often regarded as one of Manchester United's best ever players.

A B C D

2 I can't believe Freya isn't here yet. She said she would arrive early!

A B C D N

3 Jane, promised that she'd call on Emily before Eliza's party.

A B C D

4 She couldn't wait for her ^b Birthday. She was going to have a huge party.

A B C D

5 In recent years, games consoles have become a popular item on children's Christmas lists.

A B C D

In this exercise you have to choose the **best** word, or **group of words**, to complete each numbered line so that the passage makes sense and is written in correct English. Choose the best answer and **mark its letter on your answer sheet**.

Grammar Exercise

6 She at first finally initially in the end hopefully thought it would be easy to find a new job.

A B C D E

7 The five girls went to the party together; she them themselves they theirs had a great time.

A B C D E

8 The cat prowled through the streets across beneath over inside on the cover of darkness.

A B C D E

9 The teacher said he was the braver the bravest the brave the most bravest more brave boy in his class.

A B C D E

10 She is enjoying watching will watch watches watched watch the news while the children play outside.

A B C D E

In this exercise there are some **spelling** mistakes. On each numbered line there is either **one** mistake or **no** mistake. Find the group of words with the mistake in it and **mark its letter on your answer sheet**. If there is no mistake, mark **N**.

Spelling Exercise

11 The soldier injured his ^{shoulder} sholder during a routine operation on Sunday morning.
A B C D

12 The accommodation was a bargain and was sufficient for a short stay. (N)
A B C D

13 She had the opportunity to ^{view} interveiw for the position of business manager.
A B C D

14 Jake pulled a muscle in his leg and bruised his arm while playing
A B C

^{ss}
professional hockey.
D

15 Josh ^{accepted} accepted the offer at his earliest convenience and was very
A B C
excited by the opportunity.
D

Read the **whole** passage carefully, then answer the questions that follow.

A Little Grey Curl

1. A little grey curl from my father's head
2. I find unburned on the hearth,
3. And give it a place in my diary here,
4. With a feeling half sadness, half mirth.
5. For the long white locks are our special pride,
6. Though he smiles at his daughter's praise;
7. But, oh, they have grown each year more thin,
8. Till they are now but a silvery haze.

9. That wise old head! (though it does grow bald
10. With the knocks hard fortune may give)
11. Has a store of faith and hope and trust,
12. Which have taught him how to live.
13. Though the hat be old, there's a face below
14. Which telleth to those who look
15. The history of a good man's life,
16. And it cheers like a blessed book.

17. A peddler of jewels, of clocks, and of books,
18. Many a year of his wandering youth;
19. A peddler still, with a far richer pack,
20. His wares are wisdom and love and truth.
21. But now, as then, few purchase or pause,
22. For he cannot learn the tricks of trade;
23. Little silver he wins, but that which time
24. Is sprinkling thick on his meek old head.

25. But there'll come a day when the busy world,
26. Grown sick with its folly and pride,
27. Will remember the mild-faced peddler then
28. Whom it rudely had set aside;
29. Will remember the wares he offered it once
30. And will seek to find him again,
31. Eager to purchase truth, wisdom, and love,
32. But, oh, it will seek him in vain.

33. It will find but his footsteps left behind
34. Along the byways of life,
35. Where he patiently walked, striving the while
36. To quiet its tumult and strife.
37. But the peddling pilgrim has laid down his pack
38. And gone with his earnings away;
39. How small will they seem, remembering the debt
40. Which the world too late would repay.
41. God bless the dear head! and crown it with years
42. Untroubled and calmly serene;
43. That the autumn of life more golden may be
44. For the heats and the storms that have been.
45. My heritage none can ever dispute,
46. My fortune will bring neither strife nor care;
47. 'Tis an honest name, 'tis a beautiful life,
48. And the silver lock of my father's hair.

Please answer these questions. (Look at the passage again if you need to.)
You should choose the **best** answer and mark its letter on your answer sheet.

16

What prompts the narrator to think about her father's life?

- A A date in her diary.
- B He smiles at her.
- C She finds a lock of his hair.
- D She sees he is growing old.
- E Somebody knocks at the door.

17

'Though the hat be old, there's a face below' (line 13)

What does this line mean?

- A There is a young face under an old hat.
- B Although her father is getting older, he has a wealth of experience.
- C You should look at the face rather than the hat.
- D You cannot see her father's face as the hat is too large.
- E Her father needs a new hat.

18

Look at lines 17-24.

What does this verse tell you about her father's life as a peddler?

- A He became very rich.
- B He sold lots of different things.
- C He only worked when he was young.
- D He didn't make a lot of money.**
- E He didn't enjoy his job.

19

'his meek old head' (line 24)

What does this suggest about her father's character?

- A He is weak.
- B He is gentle and quiet.**
- C He is a rude man.
- D He is unwell.
- E He is depressed.

20

Look at lines 25-40.

Why will people not be able to find the peddler anymore?

- A He has gone away.**
- B He has died.
- C He is angry with them.
- D He is in hiding because he has lots of debt.
- E He works in another job.

21

'the autumn of life' (line 43)

What does this phrase mean?

- A Everything is golden.
- B Life is happier.
- C The season has changed.
- D The difficult parts of a person's life.
- E The later years in a person's life.**

22

Look at lines 40-48.

What does the narrator hope for her father's life?

- A That he makes more money.
- B That people repay him their debt.
- C That he enjoys a more peaceful life.
- D That his fortune will come.
- E That he will wear a crown.

For these questions you have to **write your answers**, neatly, in the boxes provided on your answer sheet.

23

What 3 products are mentioned that the narrator's father sold?

jewels, clocks and books

24

What is described as a 'silvery haze'? (line 8)

hair

25

Which one word in the first verse means the same as 'amusement'? (lines 1-8)

mirth

26

Which one word in verse three means the same as 'travelling aimlessly'? (lines 17-24)

Wandering

27

Which one word rhymes with 'vain' in verse four? (lines 25-32)

again

28

Which part of speech is 'pack' as it appears in the passage? (line 37)

noun

Maths - Main Test

29

Amy thinks of a 2D shape.
All of its angles are equal.

Which of these CANNOT be Amy's shape?

- A equilateral triangle
- B regular pentagon
- C scalene triangle
- D rectangle
- E regular hexagon

30

How many prime numbers are there between 50 and 60?

$$53 + 59$$

A 0

B 1

C 2

D 3

E 4

31

Which one of these words has a horizontal line of symmetry?

~~BIB~~

SUN

TOT

PIP

MUD

A BIB

B SUN

C TOT

D PIP

E MUD

32

Which 3D shape has the least number of faces?

- A cube 6
- B cuboid 6
- C triangular prism 5
- D square-based pyramid 5
- E triangular-based pyramid 4

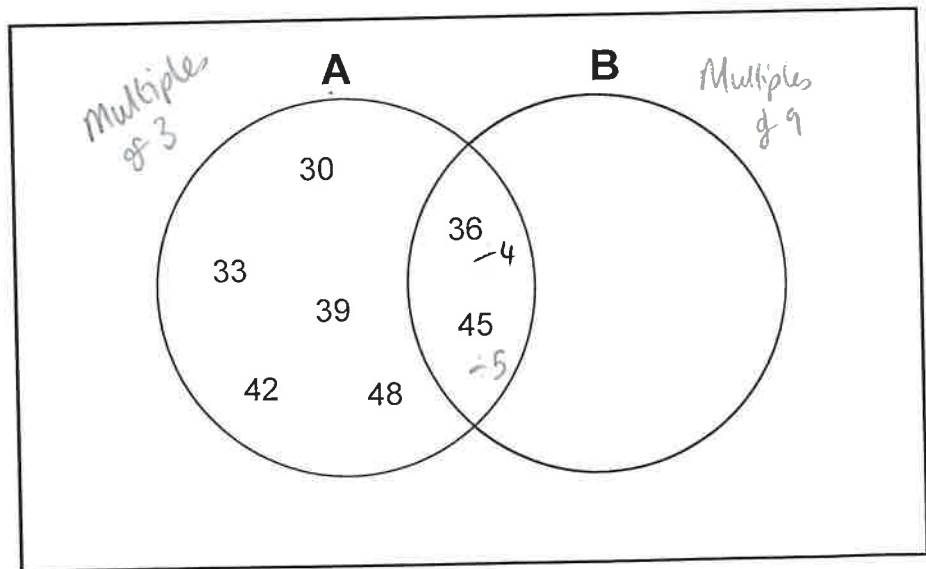
33

What is $3^3 \div 3$?

- A 1
- B 3
- C 6
- D 9
- E 18

34

The multiples between 30 and 50 of two numbers have been written in the Venn diagram below.



Set B contains multiples of what number?

- A 3
- B 9
- C 7
- D 12
- E 5

35

What is 159 hours in days and hours?

- A 5 days and 19 hours
- B 6 days and 0 hours
- C 6 days and 3 hours
- D 6 days and 5 hours
- E 6 days and 15 hours**

$24 = 1 \text{ day}$
 $48 = 2$
 $72 = 3$
 $72 \times 2 = 144 = 6 \text{ days}$

159
 $- 144$

 15 hours.

36

Jake is building a 40 metre fence on his land.
 There is a post every 2 metres along the fence.

$40 \div 2 = 20$
 $+ 1 \text{ to start.}$

How many posts are there altogether?

- A 41
- B 21**
- C 19
- D 20
- E 40

37

$3.79 \times 1000 =$

- A 0.00379
- B 379
- C 37.90
- D 3790**
- E 37900

38

Here is part of a train timetable.

White Lane	1416	1446	1516	1546	1616
Towerview	1437	1507	1537	1607	1637
Red Bridge		1542	1612	1642	1712
Woodworth	1530	1600	1630	1700	1730
Cove Bay	1550	1620		1720	
Banks Lane	1605	1635	X	1735	1805

Jamie arrives at Towerview at quarter past 3 in the afternoon. $15:15 - 16:00 = 45 \text{ mins} + 7 = 52 \text{ mins}$

How many minutes must he wait for the next train to Banks Lane?

- A 22
- B 30
- C 52**
- D 60
- E 67

$$10.00 - 0.76 = \pounds 9.24$$

39

I bought 6 bottles of juice.
I was given 76p change from £10.

$$\begin{array}{r} 1.54 \\ 6 \overline{) 9.24} \end{array}$$

How much did each bottle of juice cost?

A £1.52

B £9.24

C £4.56

D £1.54

E £2.42

40

What is the next number in this sequence?

72, 56, $+16$ 40, $+16$ 24, $+16$ 8, -8

A -8

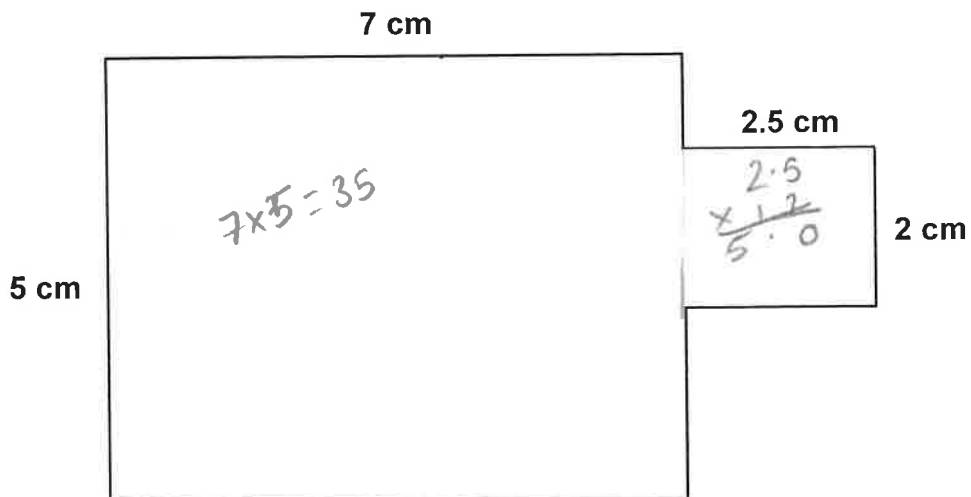
B 0

C -7

D -9

E -10

41



$$35 + 5 = 40$$

What is the area of this shape?

A 24 cm²

B 38 cm²

C 40 cm²

D 42 cm²

E 45 cm²

42

Joel saves part of his pocket money each week for six weeks.

Week	Money saved
Week 1	£2.50
Week 2	£5.00
Week 3	£3.00
Week 4	£2.00
Week 5	£2.00
Week 6	£6.50

21.00

$$6 \overline{) 21.00} \begin{array}{r} 03.50 \\ \underline{18.00} \\ 3.00 \\ \underline{3.00} \\ 0 \end{array}$$

What is the average (mean) amount of money Joel saved per week?

- A £3.00 B £2.50 C £2.00 **D £3.50** E £4.00

43

A bag of sweets weighs 122.5 grams and contains 35 sweets.
The empty bag weighs 17.5 grams.

$$\begin{array}{r} 122.5 \\ - 17.5 \\ \hline 105.0 \end{array}$$

$$\begin{array}{r} 35 \\ 70 \\ 105 \end{array} \left. \vphantom{\begin{array}{r} 35 \\ 70 \\ 105 \end{array}} \right\} 3$$

What is the weight of 1 sweet?

- A 1.5 g B 2 g C 2.5 g **D 3 g** E 3.5 g

44

There are 30 pupils in a class.
50% of the pupils have brown eyes. 15
10% of the pupils have green eyes. 3
The rest have blue eyes. 18

$$30 - 18 = 12$$

How many pupils have blue eyes?

- A 8 B 18 C 6 D 10 **E 12**

45

A container can hold 800 ml of water.
It is filled from a larger container which holds 1.2 litres of water.

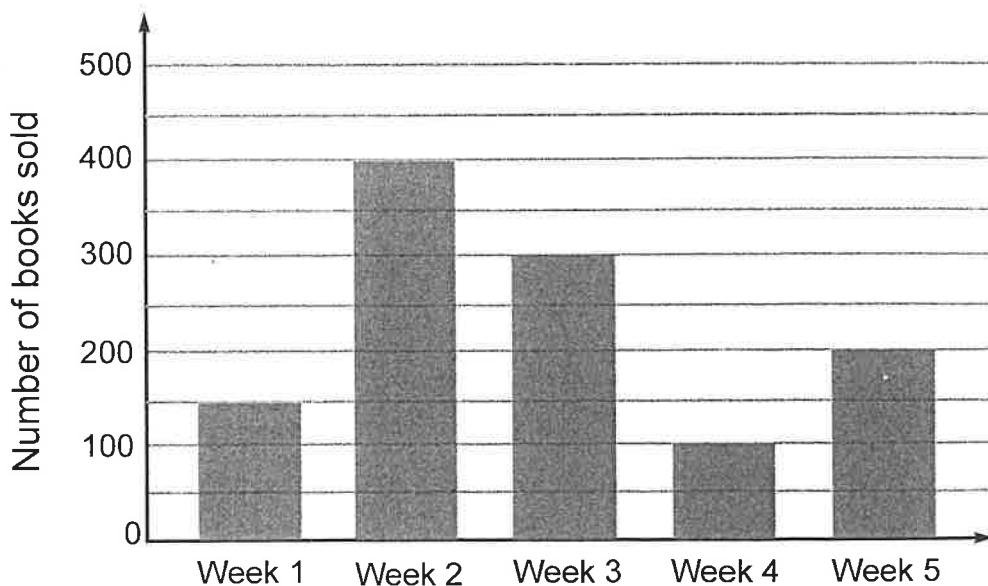
1200
- 800

How much water is left in the larger container?

- A 40 ml B 4 litres C 400 ml D 400 litres E 4 ml

46

This bar chart shows how many books were sold each week for five weeks.



Which statement **MUST** be true?

- A 800 books were sold in the first three weeks ~~x~~ 350
B $\frac{3}{4}$ of the number of books were sold in week 4 than week 2 ~~x~~
C The most books were sold in week 4 ~~x~~
D Twice as many books were sold in week 3 than week 1 ✓
E The least amount of books were sold in week 2 ~~x~~

47

What is three-quarters of 1 written as a decimal number?

A 0.34

B 0.5

C 0.75

D 0.5

E 0.43

48

Pencils	£0.38
Notebooks	£2.99
Rubbers	£0.69
Pens	£0.99

Milly buys 1 notebook, 3 pencils, 3 pens and 2 rubbers at the stationery shop.

3.00 1.20 3.00 1.40

Which of these is the best estimate for the total cost of Milly's items?

A £8.50

B £8.00

C £7.50

D £7.00

E £6.50

49

What number should go in the box?

$$650 \div \boxed{} = 0.65$$

A 1

B 10

C 100

D 1000

E 0.1

50

James and John went running every day for 3 weeks. *4* $\sqrt{\begin{array}{r} 030.3 \\ 121.2 \end{array}}$

The total distance they ran is 121.2 km.

John ran exactly three times further than James.*4 parts. ÷ 4*

How far did James run in total?

A 90.9 km

B 40.4 km

C 60.6 km

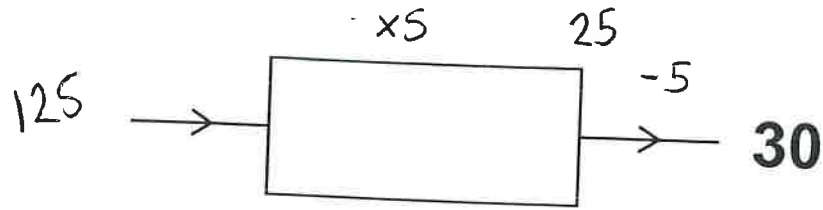
D 24.24 km

E 30.3 km

For questions 51–56, you have to **write your answers** in the boxes provided on your answer sheet. The units of measurement have been given.

51

This machine divides by 5 and then adds 5.

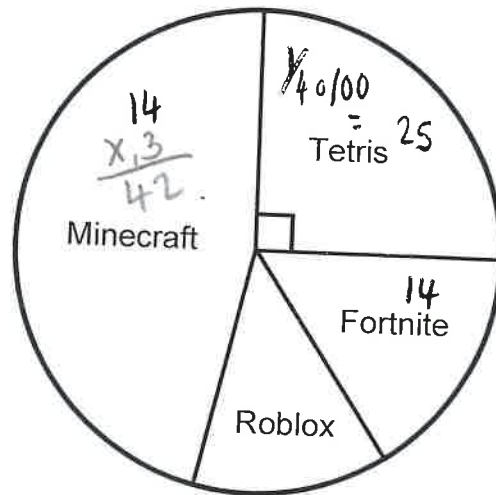


Which number has been put in?

125

52

The pie chart below shows the favourite video games of 100 children.



$$\begin{array}{r} 42 \\ + 25 \\ \hline 14 \\ \hline 81 \end{array}$$

$$100 - 81 = 19$$

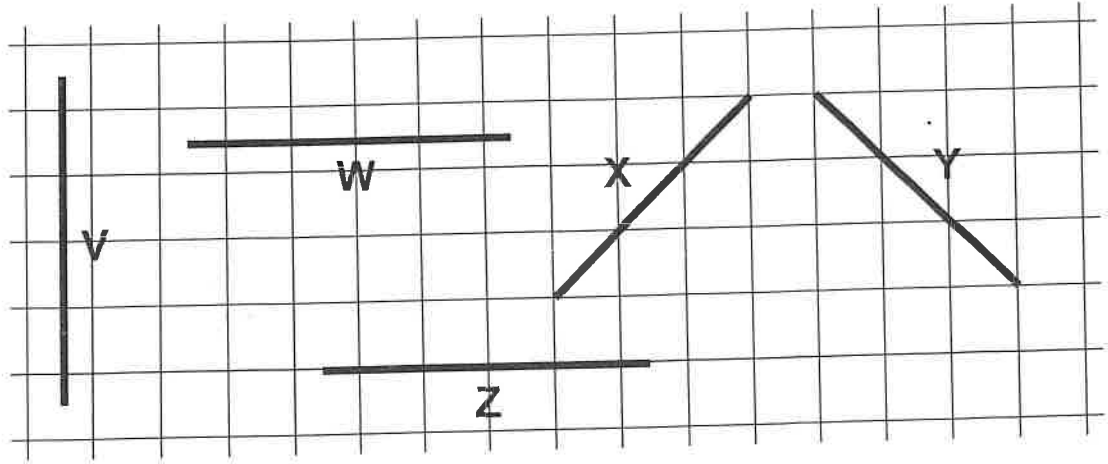
The number of children that chose Fortnite is 14.

Three times as many children chose Minecraft compared to Fortnite.

How many children chose Roblox?

19

53

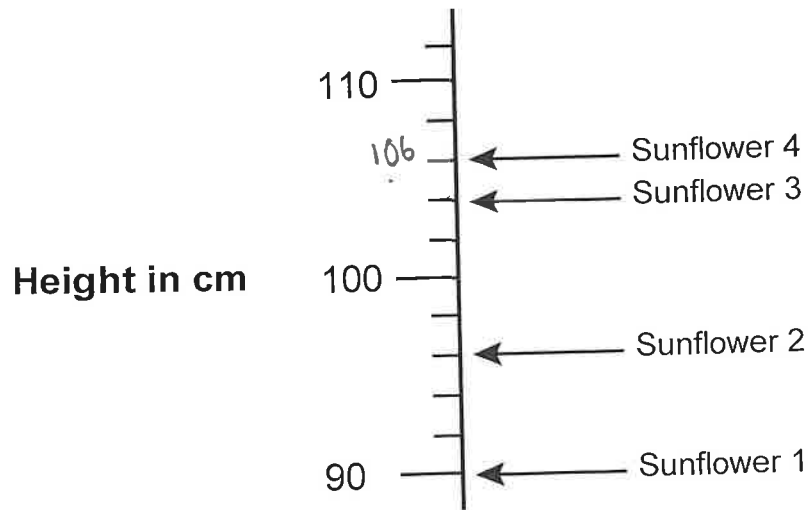


Which line is perpendicular to line Z?

V

54

Mrs Maitland grew 4 sunflowers.



This chart shows the height of her sunflowers in cm.

What height is sunflower 4?

106 cm

55

Simon was 10 minutes late for the 11.35 am bus.
He caught the next one at 11.50 am.

+10

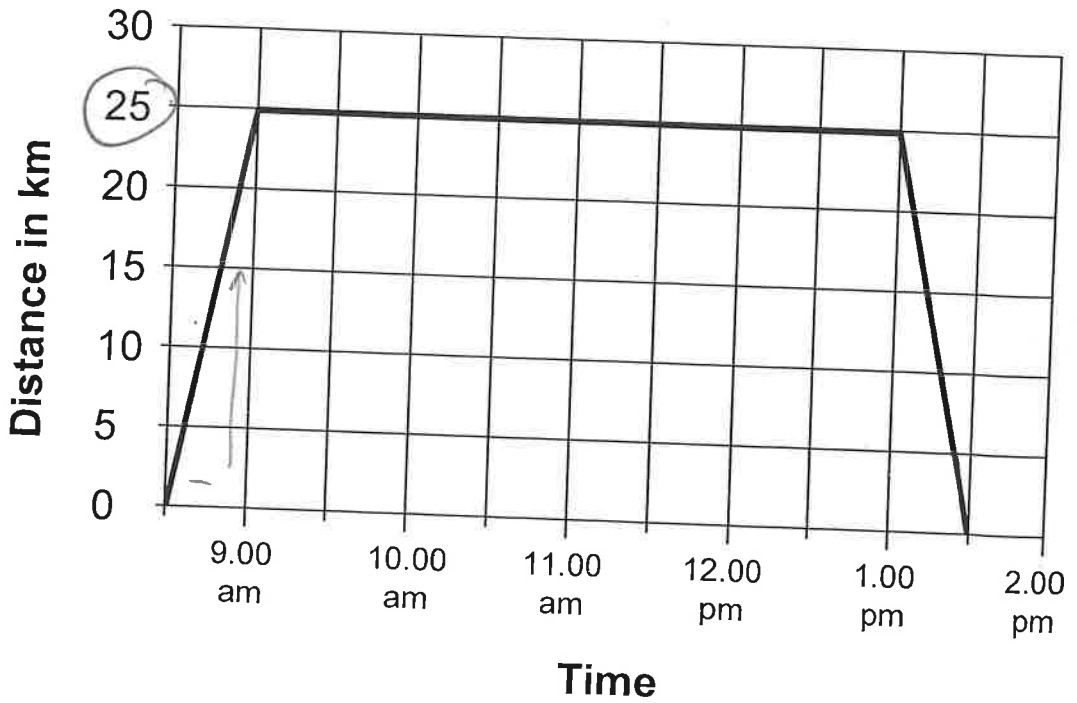
11:45

How long did Simon wait for the bus?

5mins

56

Finn travels to work and back, his journey is shown on the line graph.



How far is Finn's work from his home?

25 km

Copyright © The Transfer Test, 2025

All rights reserved, including translation.
No part of this booklet may be photocopied, modified or
otherwise reproduced without prior written permission.

Printed in Northern Ireland.

THE  TRANSFER TEST

www.thetransfertest.com | sales@thetransfertest.com