

# THE TRANSFER TEST

www.thetransfertest.com | sales@thetransfertest.com

*Teacher's Copy*

**P7**

**School Edition**

## **Practice Test Paper 6**

**Time: 60 minutes**

**VERSION 2** (with Practice Test section)

**for SEAG Entrance Assessment**

# English - Practice Test

In this question there is either **one** punctuation mistake or **no** punctuation mistake.  
Find the group of words with the mistake in it and mark its letter on your answer sheet.  
**If there is no mistake, mark N.**

**P1** They were working on number pattern's and sequences in maths class.  
A B C D

In this question you have to choose the **best** word to complete the sentence, so that it makes sense and is written in correct English. Choose **the** best answer and mark its letter on your answer sheet.

**P2** She wasn't sure      volunteered to help her that day.  
A B C D E

In this question there is either **one** spelling mistake or **no** spelling mistake. Find the group of words with the mistake in it and mark its letter on your answer sheet. **If there is no mistake, mark N.**

**P3** He was hoping to acheive the highest mark in his class this year.  
A B C D

Read this passage to yourself.

London was fifteen hundred years old, and was a great town—for that day. It had a hundred thousand inhabitants—some think double as many. The streets were very narrow, and crooked, and dirty, especially in the part where Tom Canty lived, which was not far from London Bridge. The houses were of wood, with the second story projecting over the first, and the third sticking its elbows out beyond the second.

The higher the houses grew, the broader they grew. They were skeletons of strong criss-cross beams, with solid material between, coated with plaster. The beams were painted red or blue or black, according to the owner's taste, and this gave the houses a very picturesque look. The windows were small, glazed with little diamond-shaped panes, and they opened outward, on hinges, like doors.

Answer this question. Choose **one** answer from the options below and mark its letter on your answer sheet.

**P4** What were the houses made from?

- A diamonds
- B plaster
- C skeletons
- D wood
- E bricks

For this question, you have to **write your answer** in the box provided on your answer sheet (box P5).

**P5** Which **one word** in lines 1-2 means the same as 'residents'?



# Maths - Practice Test

P6

$$38.9 \div 100 =$$

A 389

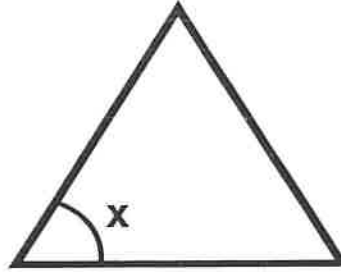
B 3890

C 0.389

D 3.89

E 0.0389

P7



What is the approximate value of angle x?

A  $30^\circ$

B  $45^\circ$

C  $60^\circ$

D  $90^\circ$

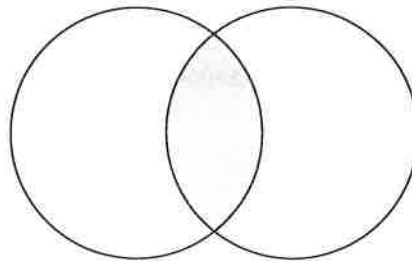
E  $120^\circ$

P8

Which number belongs in the shaded section of this diagram?

Multiples of 3

Multiples of 7



A 12

B 14

C 35

D 21

E 24

For these questions you have to **write your answers** in the boxes provided on your answer sheet (box P9 and P10). The units of measurement have been given.

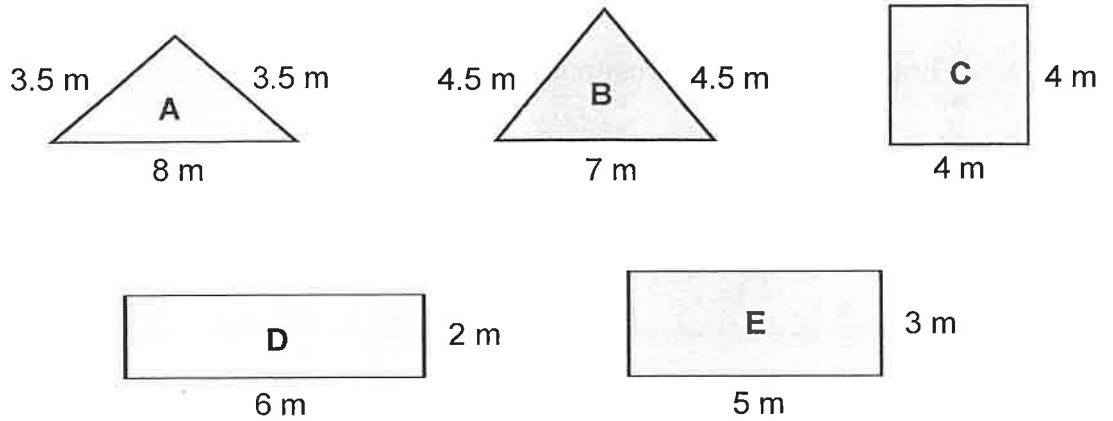
**P9**

What is 365 rounded to the nearest 10?

---

**P10**

Five shapes are shown below.



What is the perimeter of the shape that has the shortest perimeter?

---



# English - Main Test

In this exercise there are some mistakes with **punctuation** or use of **capital letters**. On each numbered line there is either **one** mistake or **no** mistake. Find the group of words with the mistake in it and **mark its letter on your answer sheet**. If there is no mistake, mark **N**.

## Punctuation Exercise

1 They arranged to go to the Cinema to watch the new Ghostbusters movie.  
A B C D

2 Next year, Sally will be nineteen years old; John will be <sup>twenty-two</sup>twentytwo.  
A B C D

<sup>I'm</sup> 'Im sorry I've taken so long,' she apologised. 'The traffic was terrible.'  
A B C D

4 She couldn't understand why he hadn't bothered to turn up; maybe  
A B C

he had forgotten.  
D N

5 She didn't know where she had lost it and therefore. <sup>X</sup>had to  
A B C

retrace her steps.  
D

In this exercise you have to choose the **best** word, or **group of words**, to complete each numbered line so that the passage makes sense and is written in correct English. Choose the best answer and **mark its letter on your answer sheet**.

## Grammar Exercise

6 She knew before she had  almost  even  never  not  just  
A B C D E

arrived that she had worn the wrong shoes.

7 I bought  herself  himself  themselves  myself  yourselves  
A B C D E

a new coat at the weekend.

8 What is the  quickly  more quick  most quickest  quickliest  quickest  
A B C D E

route into town from here?

9 It hasn't stopped snowing  since  when  after  before  until  
A B C D E

we arrived last night.

10 They  disgust  discussed  discussion  disgusting  discuss  
A B C D E

which direction they are going.

In this exercise there are some **spelling** mistakes. On each numbered line there is either **one** mistake or **no** mistake. Find the group of words with the mistake in it and **mark its letter on your answer sheet**. If there is no mistake, mark **N**.

## Spelling Exercise

11 Their new puppy is extremely <sup>ly</sup> mischievous, and my mum thinks he's a nuisance.  
A B C D

12 It was recommended that the aggressive dog be put in temporary accomodation.<sup>mm</sup>  
A B C D

13 It was inevitable that the train would be delayed after a terrible  
storm during the night.  
A B C D (N)

14 Melissa was slightly embarrassed when her presentation <sup>failed</sup> failed to display  
on the computer screen.  
A B C D

15 It was announced on the news that the health service is <sup>e</sup> apparantly  
under great pressure.  
A B C D

Read the **whole** passage carefully, then answer the questions that follow.

## The Wind in the Willows

1. When Toad found himself immured in a dank and noisome dungeon, and knew that all the
  2. grim darkness of a medieval fortress lay between him and the outer world of sunshine and
  3. well-metalled high roads where he had lately been so happy, disporting himself as if he had
  4. bought up every road in England, he flung himself at full length on the floor, and shed bitter
  5. tears, and abandoned himself to dark despair. "This is the end of everything" (he said), "at
  6. least it is the end of the career of Toad, which is the same thing; the popular and handsome
  7. Toad, the rich and hospitable Toad, the Toad so free and careless and debonair!
  8. How can I hope to be ever set at large again" (he said), "who have been imprisoned so justly
  9. for stealing so handsome a motor-car in such an audacious manner, and for such lurid and
  10. imaginative cheek, bestowed upon such a number of fat, red-faced policemen!" (Here his
  11. sobs choked him.) "Stupid animal that I was" (he said), "now I must languish in this dungeon,
  12. till people who were proud to say they knew me, have forgotten the very name of Toad! O
  13. wise old Badger!" (he said), "O clever, intelligent Rat and sensible Mole! What sound
  14. judgments, what a knowledge of men and matters you possess! O unhappy and forsaken
  15. Toad!" With lamentations such as these he passed his days and nights for several weeks,
  16. refusing his meals or intermediate light refreshments, though the grim and ancient gaoler,
  17. knowing that Toad's pockets were well lined, frequently pointed out that many comforts, and
  18. indeed luxuries, could by arrangement be sent in—at a price—from outside.
- 
19. Now the gaoler had a daughter, a pleasant wench and good-hearted, who assisted her
  20. father in the lighter duties of his post. She was particularly fond of animals, and, besides her
  21. canary, whose cage hung on a nail in the massive wall of the keep by day, to the great
  22. annoyance of prisoners who relished an after-dinner nap, and was shrouded in an
  23. antimacassar on the parlour table at night, she kept several piebald mice and a restless
  24. revolving squirrel. This kind-hearted girl, pitying the misery of Toad, said to her father one
  25. day, "Father! I can't bear to see that poor beast so unhappy, and getting so thin! You let me
  26. have the managing of him. You know how fond of animals I am. I'll make him eat from my
  27. hand, and sit up, and do all sorts of things."
- 
28. Her father replied that she could do what she liked with him. He was tired of Toad, and his
  29. sulks and his airs and his meanness. So that day she went on her errand of mercy, and
  30. knocked at the door of Toad's cell.
- 
31. "Now, cheer up, Toad," she said, coaxingly, on entering, "and sit up and dry your eyes and
  32. be a sensible animal. And do try and eat a bit of dinner. See, I've brought you some of mine,
  33. hot from the oven!"

34. It was bubble-and-squeak, between two plates, and its fragrance filled the narrow cell. The  
35. penetrating smell of cabbage reached the nose of Toad as he lay prostrate in his misery on  
36. the floor, and gave him the idea for a moment that perhaps life was not such a blank and  
37. desperate thing as he had imagined. But still he wailed, and kicked with his legs, and refused  
38. to be comforted. So the wise girl retired for the time, but, of course, a good deal of the smell  
39. of hot cabbage remained behind, as it will do, and Toad, between his sobs, sniffed and  
40. reflected, and gradually began to think new and inspiring thoughts: of chivalry, and poetry,  
41. and deeds still to be done; of broad meadows, and cattle browsing in them, raked by sun and  
42. wind; of kitchen-gardens, and straight herb-borders, and warm snap-dragon beset by bees;  
43. and of the comforting clink of dishes set down on the table at Toad Hall, and the scrape of  
44. chair-legs on the floor as every one pulled himself close up to his work. The air of the narrow  
45. cell took a rosy tinge; he began to think of his friends, and how they would surely be able to  
46. do something; of lawyers, and how they would have enjoyed his case, and what an ass he  
47. had been not to get in a few; and lastly, he thought of his own great cleverness and  
48. resource, and all that he was capable of if he only gave his great mind to it; and the cure was  
49. almost complete.

50. When the girl returned, some hours later, she carried a tray, with a cup of fragrant tea  
51. steaming on it; and a plate piled up with very hot buttered toast, cut thick, very brown on both  
52. sides, with the butter running through the holes in it in great golden drops, like honey from  
53. the honeycomb. The smell of that buttered toast simply talked to Toad, and with no uncertain  
54. voice; talked of warm kitchens, of breakfasts on bright frosty mornings, of cosy parlour  
55. firesides on winter evenings, when one's ramble was over and slippers feet were propped  
56. on the fender; of the purring of contented cats, and the twitter of sleepy canaries. Toad sat  
57. up on end once more, dried his eyes, sipped his tea and munched his toast, and soon began  
58. talking freely about himself, and the house he lived in, and his doings there, and how  
59. important he was, and what a lot his friends thought of him.

60. The gaoler's daughter saw that the topic was doing him as much good as the tea, as indeed  
61. it was, and encouraged him to go on.

62. "Tell me about Toad Hall," said she. "It sounds beautiful."

63. "Toad Hall," said the Toad proudly, "is an eligible self-contained gentleman's residence very  
64. unique; dating in part from the fourteenth century, but replete with every modern  
65. convenience. Up-to-date sanitation. Five minutes from church, post-office, and golf-links,  
66. Suitable for——"

67. "Bless the animal," said the girl, laughing, "I don't want to take it. Tell me something real  
68. about it. But first wait till I fetch you some more tea and toast."

Please answer these questions. (Look at the passage again if you need to.)  
You should choose the **best** answer and mark its letter on your answer sheet.

- 16** Look at lines 1-18.  
**Why did Toad find himself imprisoned?**
- A He stole refreshments.
  - B He stole a car.**
  - C He drove his car too fast.
  - D He was careless with money.
  - E He purchased the roads in England.

- 17** What word best describes Toad's character?
- A generous
  - B kind
  - C irresponsible**
  - D thoughtful
  - E selfless

- 18** Look at lines 8-18.  
**What was Toad most upset by?**
- A The lack of food.
  - B Not having any luxuries.
  - C His dark cell.
  - D The thought of being forgotten.**
  - E The cheeky policemen.

- 19** Which of Toad's friends was described as responsible?
- A The gaoler's daughter
  - B Badger
  - C Rat
  - D The gaoler
  - E Mole**

20

What did Toad refuse to do?

- A Eat
- B Talk to the policemen
- C Cry
- D Think of his friends
- E Become melancholy

21

'knowing that Toad's pockets were well lined' (line 17)

What does this tell us about Toad?

- A That he had expensive clothes.
- B That he had money.
- C That he enjoyed luxury items.
- D That he had warm pockets.
- E That he went to a good tailor.

22

Look at lines 19-30.

How did the gaoler feel about Toad?

- A He understood Toad's sorrow.
- B He was fed up with him.
- C He thought he was humorous.
- D He liked all animals.
- E He wanted to help him.

For these questions you have to **write your answers**, neatly, in the boxes provided on your answer sheet.

23

Look at lines 34-59. What is the first thing that Toad eats in prison?

toast

24

What is Toad's home called?

Toad Hall

25

Which one word in lines 10-12 means the same as 'forced to remain'?

languish

26

Which five-word phrase in lines 64-65 tells us that Toad's home is well stocked with every current amenity

replete with every modern convenience

27

'This kind-hearted girl, pitying the misery of Toad, said to her father one day' (lines 24-25)

What are the hyphenated words in this sentence?

Kind-hearted.

28

'the holes in it in great golden drops, like honey from the honeycomb' (lines 52-53)

What word is the compound word in this sentence?

honeycomb.

# Maths - Main Test

29

Jo is 137.2 cm tall and Bea is 150.8 cm tall.

$$\begin{array}{r} 137.2 \\ + 150.8 \\ \hline 288.0 \text{ cm} \end{array}$$

What is the sum of the heights of the two girls?

A 2.88 m

B 2.872 m

C 28.8 m

D 287 m

E 288 m

30

Joseph bought 3 packets of crisps at the shops.

$$20/25g \times 3$$

Roughly, how much is Joseph's 3 packets of crisps likely to weigh?

A 3 kg

B 75 kg

C 950 g

D 75 g

E 10 g

31

Which 3D shape has faces made up of two triangles and three rectangles?

A triangular prism

B cylinder

C square-based pyramid

D cube

E cuboid



32

What is  $7^3 \times 2$ ?

$$7 \times 7 = 49$$

$$\begin{array}{r} 49 \\ \times 67 \\ \hline 343 \end{array}$$

$$\begin{array}{r} 343 \\ \times 2 \\ \hline 686 \end{array}$$

A 98

B 42

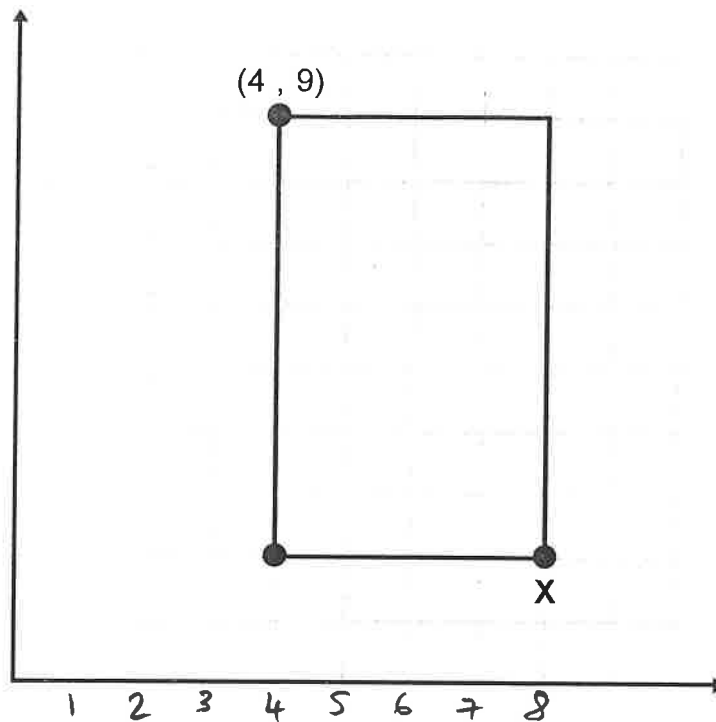
C 686

D 343

E 14

33

The diagram shows a rectangle drawn on a coordinate grid.



What are the coordinates of point X?

- A (9, 4)    **B (8, 2)**    C (2, 8)    D (9, 2)    E (7, 2)

34

$$\frac{1}{4} \text{ of } y = 7 = \frac{3}{4} \quad 7 \times 3 = 21$$

What is 75% of y?

- A 14    B 28    C 10.5    **D 21**    E 17.5

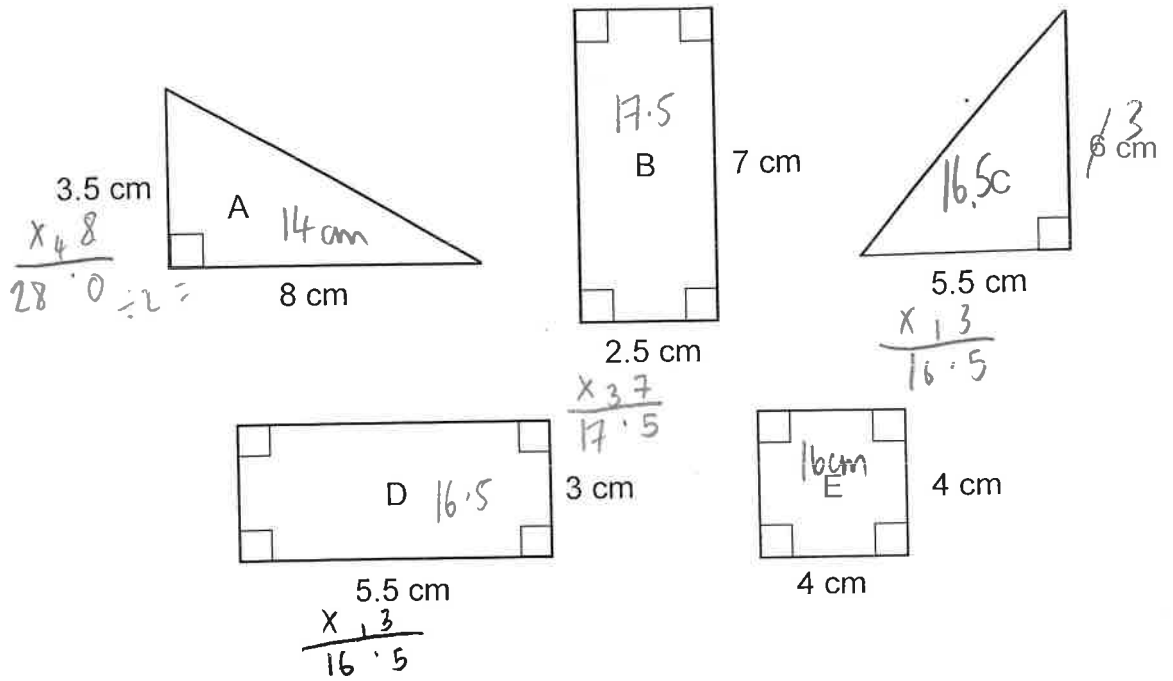
35

Which of these is a prime number?

- A 49    B 63    C 27    D 45    **E 37**
- ~~x~~    ~~x~~    ~~x~~    ~~x~~

36

Five shapes are shown below.

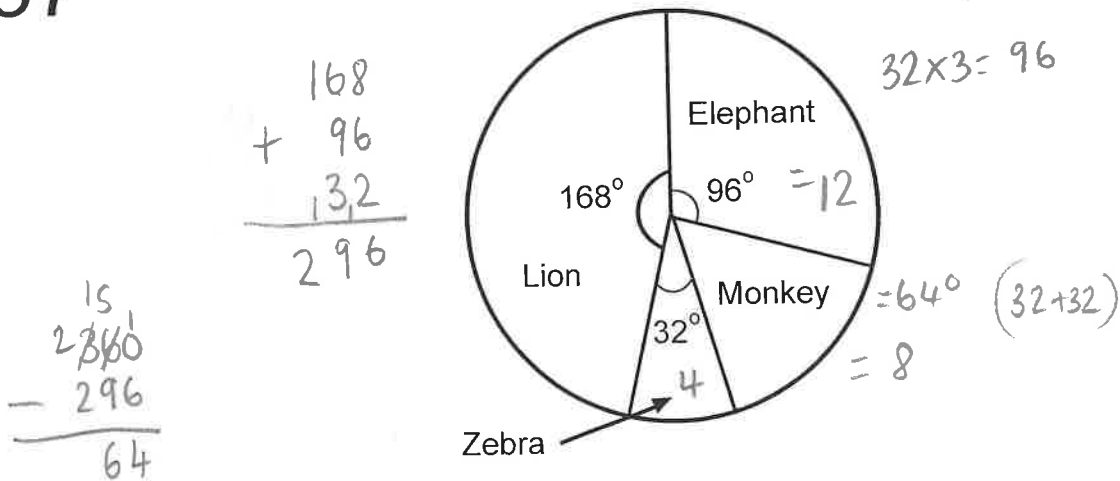


Which shape has the largest area?

- A A      **B B**      C C      D D      E E

37

The pie chart below shows the favourite animal of a group of children.



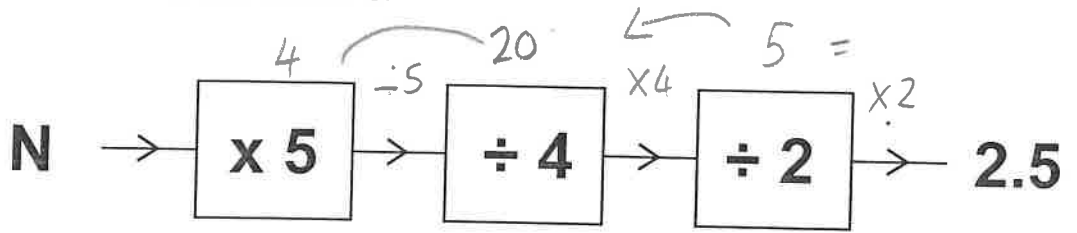
4 children said zebras are their favourite animal.

How many children said that monkeys are their favourite animal?

- A 8**      B 12      C 9      D 10      E 15

38

Look at this number machine.



If the final number is 2.5, what is the value of N?

A 4.5

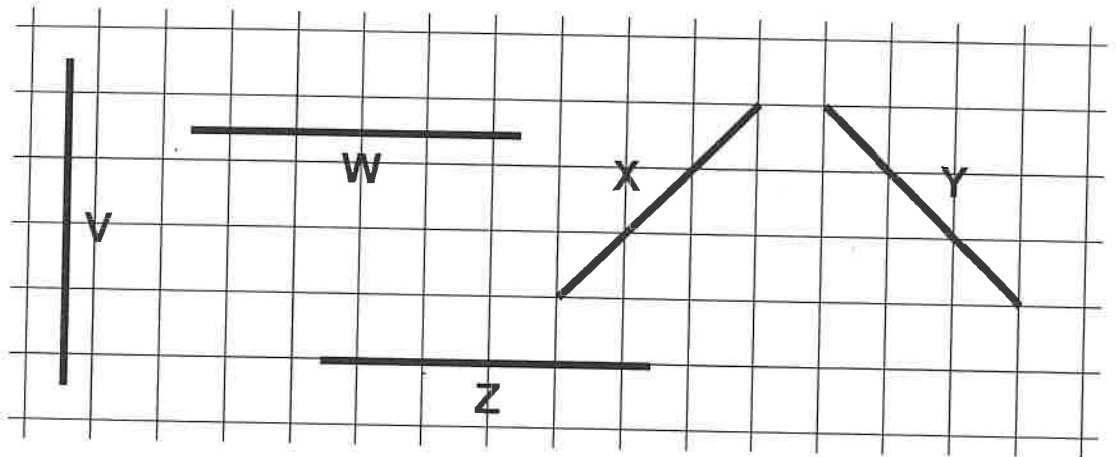
**B 4**

C 3.5

D 3

E 2.5

39



Which of these statements is NOT correct?

A line W is parallel to line Z ✓

B line Z is perpendicular to line V ✓

**C line X is parallel to line Y**

D line V is a vertical line

E line W is a horizontal line

40

What time is 4 hours and 15 minutes earlier than midnight?

A 8.45 pm

B 20:15

C 9.35 pm

**D 19:45**

E 7.25 pm

41

Milo buys an item at a shop and pays with a £2 coin. He gets 2 coins as his change.

Which of these amounts is NOT the cost of the item?

A £1.90  
5p x 2

B £1.60  
20p x 2

**C £1.50**

D £1.98  
2p x 2

E £1.80  
10p x 2

42

Which one of the following statements is false?

A a quarter turn is  $90^\circ$  ✓

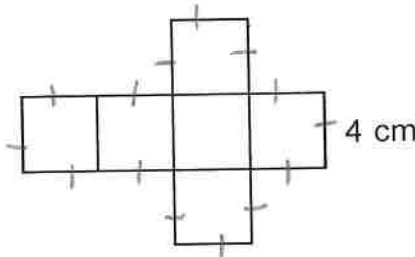
B a half turn is  $180^\circ$  ✓

C a three-quarter turn is  $270^\circ$  ✓

**D two whole turns is  $620^\circ$**

E three whole turns is  $1080^\circ$

43



$$\begin{array}{r} 14 \\ \times 4 \\ \hline 56 \end{array}$$

This net can be folded to form a cube.

What is the perimeter of the net?

A 48 cm

**B 56 cm**

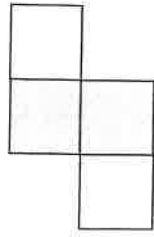
C 60 cm

D 52 cm


E 64 cm

44

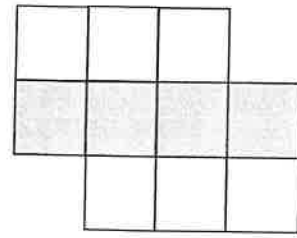
The series of patterns below is made using a mixture of white and shaded square tiles. Pattern 1 contains 4 tiles. It has two white and two shaded tiles.



Pattern 1



Pattern 2



Pattern 3

P | S  
1 | 2  
2 | 3  
3 | 4  
4 | 5  
5 | 6  
6 | 7

If this pattern continues, how many shaded squares are needed for pattern 6?

A 5

B 6

C 7

D 8

E 9

45

Lottery prize money is shared equally between 8 friends.

What percentage will each of them receive?

A 8.25%

B 15%

C 10.5%

D 11.25%

E 12.5%

46

In a class of 34 children, 6 of them do not have a sibling.

Approximately what proportion is this?

$$\frac{6}{34} =$$

A  $\frac{1}{6}$

B  $\frac{1}{5}$

C  $\frac{1}{4}$

D  $\frac{1}{7}$

E  $\frac{1}{8}$

47

$\begin{array}{cccccc} & 10 & & 46 & & \\ \hline 1 & 3 & 6 & 10 & 15 & 21 \end{array}$

10 + 46

What is the sum of the first six triangular numbers?

A 35

**B 56**

C 49

D 83

E 66

48

How many lines of symmetry does a parallelogram have?

**A 0**

B 1

C 2

D 4

E 8

49

Two containers hold a total of 390 ml of water.

One container holds twice as much water as the other. = 3

$$\begin{array}{r} 130 \\ 3 \overline{) 390} \end{array}$$

How much water does the larger container hold?

$$\begin{array}{r} 130 \\ \times 2 \\ \hline 260 \end{array}$$

A 195 ml

B 230 ml

**C 260 ml**

D 295 ml

E 130 ml

50

Joe spends £2.40 on two small packs of biscuits.

He spends £5.97 on three large packs of biscuits.

How much more does a large pack of biscuits cost than a small pack?

$$\begin{array}{r} 1.20 \\ 2 \overline{) 2.40} \end{array}$$

**A 79p**

B 80p

C £3.57

D £3.58

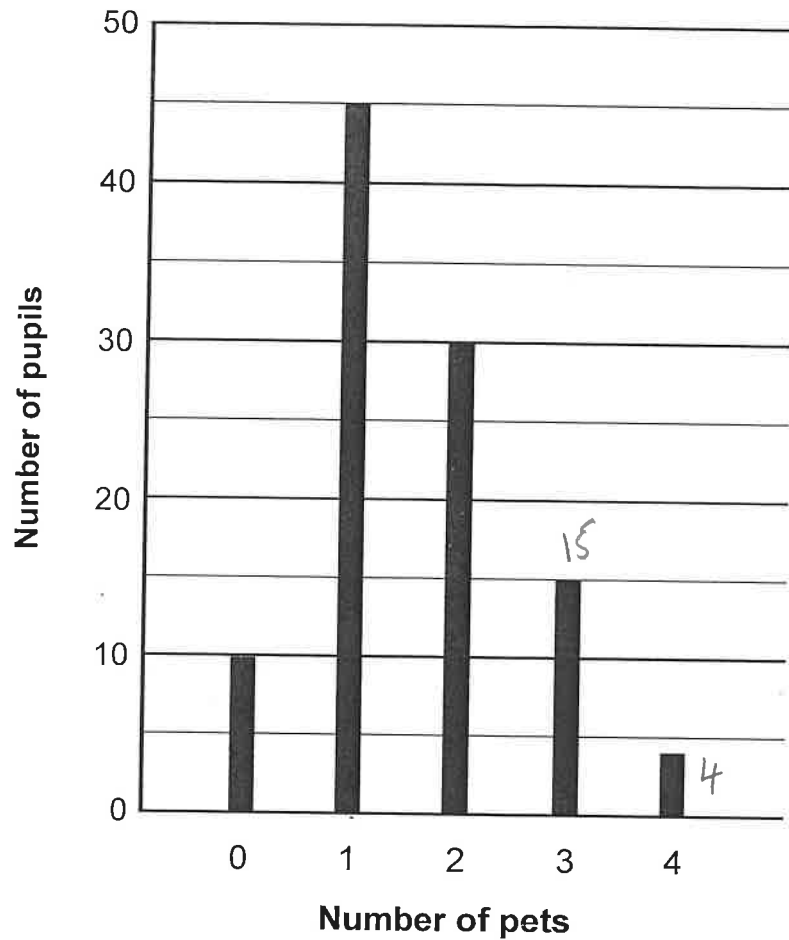
E £3.56

$$\begin{array}{r} 1.99 \\ 3 \overline{) 5.97} \end{array}$$

$$\begin{array}{r} 1.99 \\ - 1.20 \\ \hline 0.79 \end{array}$$

For questions 51–56, you have to **write your answers** in the boxes provided on your answer sheet. The units of measurement have been given.

51



This bar chart shows how many pets the pupils at a primary school have.

How many pupils have more than 2 pets?

$$15 + 4 = 19$$

52

How many hours are there in the month of October?

$$\begin{array}{r} 31 \\ \times 24 \\ \hline 124 \\ 620 \\ \hline 744 \end{array}$$

744 hours

53

The pictogram below shows the different video games that children like to play.

Video Game	Number of Children
Minecraft	● ● ● ● ● ●
Mario Kart	● ● ● ●
Roblox	● ● ●
Fortnite	● ● ●
Sonic	● ● ●

Key:

● = 4 children

5x4 + 2

How many children chose Minecraft?

22 children

54

Look at the group of 10 numbers in the box below.

20	26	18	17	21
15	22	10	19	? 9

The smallest of this group of numbers is missing.

The range of these numbers is 17.

big - small.

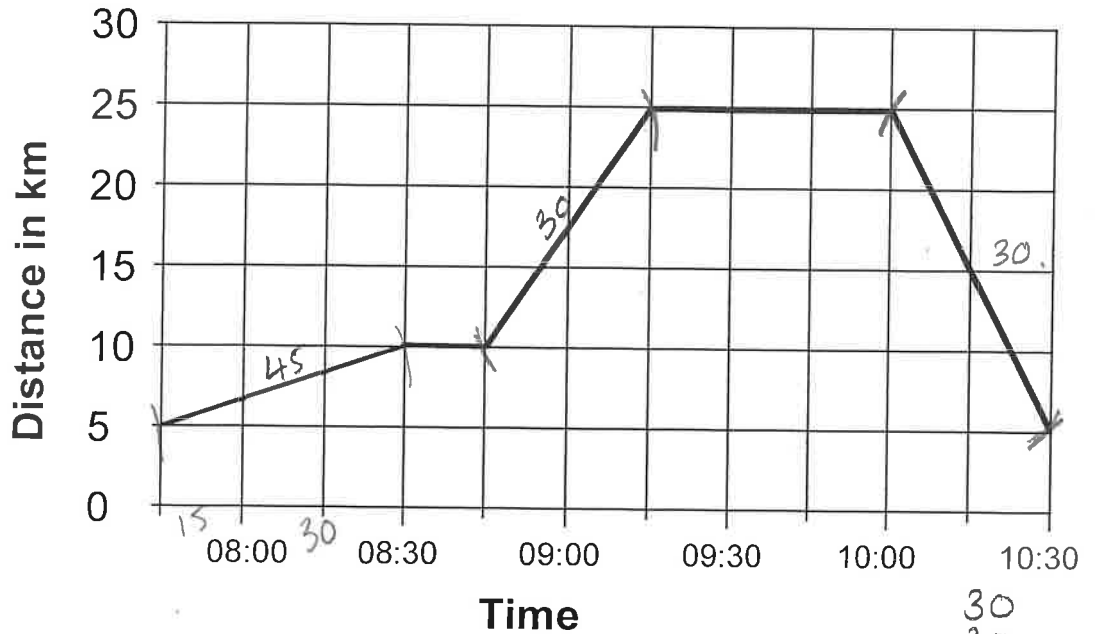
What is the missing number?

$$\begin{array}{r} 26 \\ - 17 \\ \hline 9 \end{array}$$

9

55

Sara cycled into town to do some shopping.  
 She stopped for a rest on the way.  
 She then cycled straight home after finishing her shopping.



What is the total number of MINUTES Sara was cycling?

$$\begin{array}{r} 30 \\ 30 \\ 45 \\ \hline 105 \end{array}$$

105 mins

56

Michael asked pupils at his school what their favourite food is.  
 He recorded all their responses in a tally chart.

Favourite Food	Tally	Number of pupils
Pizza		12
Fish and chips		8
Salad		6
Pancakes		4
Lasagne		2

How many pupils in total chose either fish and chips or salad as their favourite food?

$$8 + 6 = 14 \text{ pupils}$$

Copyright © The Transfer Test, 2025

All rights reserved, including translation.  
No part of this booklet may be photocopied, modified or  
otherwise reproduced without prior written permission.

Printed in Northern Ireland.

**THE | TRANSFER TEST**

---

[www.thetransfertest.com](http://www.thetransfertest.com) | [sales@thetransfertest.com](mailto:sales@thetransfertest.com)